



# Estimating Time

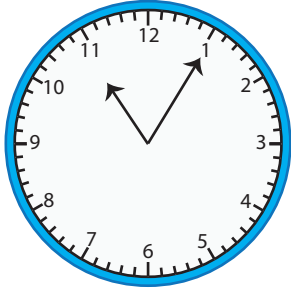
Name \_\_\_\_\_

Score \_\_\_\_\_

ET:02

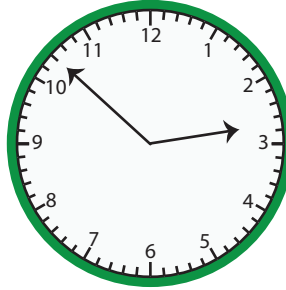
What is the time? Round to the nearest hour and write it down.

1)

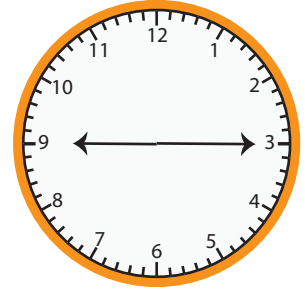


11:00


2)



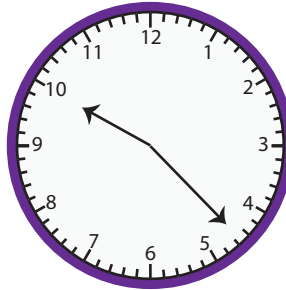
3)



4)



5)



6)



7) 02:15

8) 04:45

9) 12:50

10) 08:22

11) 05:41

12) 04:06



# Estimating Time

Name \_\_\_\_\_

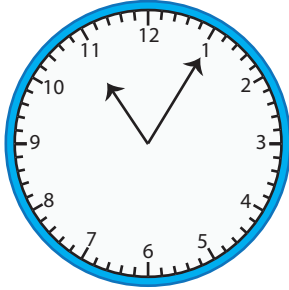
Score \_\_\_\_\_

## Answer key

ET:02

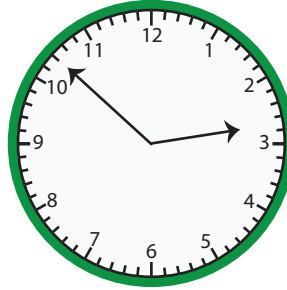
What is the time? Round to the nearest hour and write it down.

1)



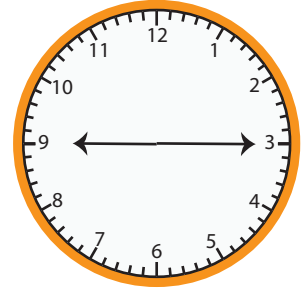
**11:00**

2)



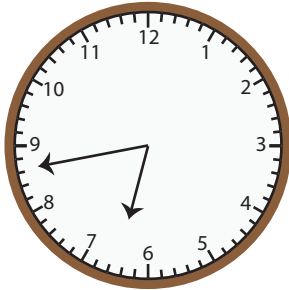
**03:00**

3)



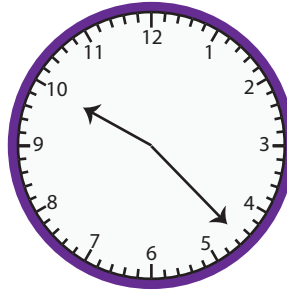
**09:00**

4)




**07:00**

5)



**10:00**

6)



**11:00**

7) 02:15

**02:00**

8) 04:45

**05:00**

9) 12:50

**01:00**

10) 08:22

**08:00**

11) 05:41

**06:00**

12) 04:06

**04:00**