



# Estimating Time

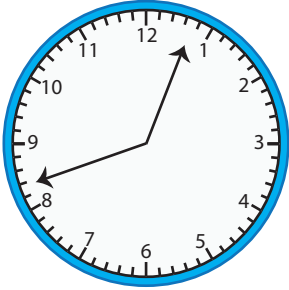
Name \_\_\_\_\_

Score \_\_\_\_\_

ET:01

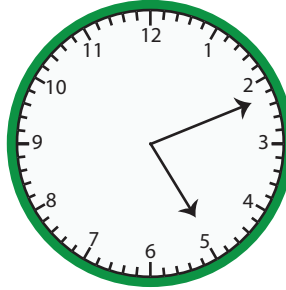
What is the time? Round to the nearest hour and write it down.

1)



01:00


2)



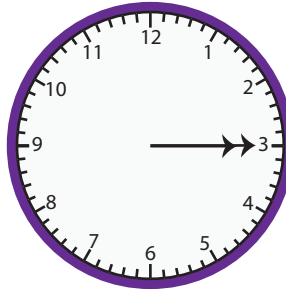
3)



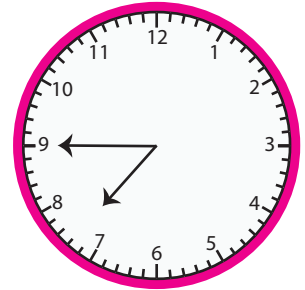
4)



5)



6)



7) 01:52

8) 06:18

9) 11:20

10) 04:05

11) 12:43

12) 02:39



# Estimating Time

Name \_\_\_\_\_

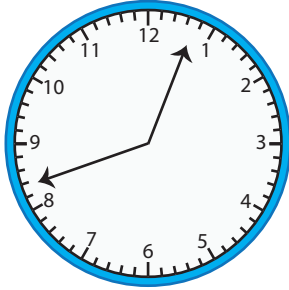
Score \_\_\_\_\_

## Answer key

ET:01

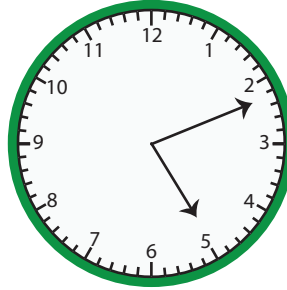
What is the time? Round to the nearest hour and write it down.

1)



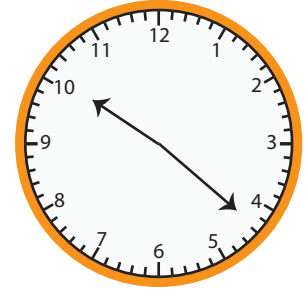
**01:00**

2)




**05:00**

3)



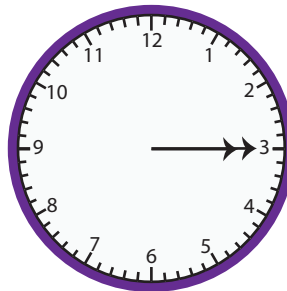
**10:00**

4)



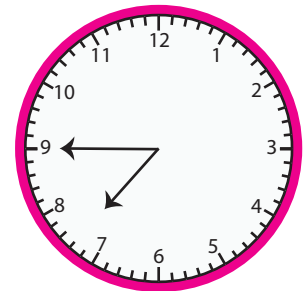
**12:00**

5)



**03:00**

6)



**08:00**

7) 01:52

**02:00**

8) 06:18

**06:00**

9) 11:20

**11:00**

10) 04:05

**04:00**

11) 12:43

**01:00**

12) 02:39

**03:00**