



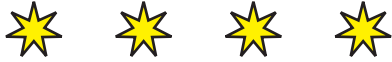
Division Groups

Name _____

Score _____

DS:II:14

1) Divide the stars in to groups of 2.



Number of groups _____

2) Divide the hearts in to groups of 3.



Number of groups _____

3) Divide the diamonds in to groups of 4.



Number of groups _____

4) Divide the ovals in to groups of 3.



Number of groups _____

5) Divide the rectangles in to groups of 4.



Number of groups _____



Division Groups

Name _____

Score _____

Answer key


DS:II:14

1) Divide the stars in to groups of 2.



Number of groups 2

2) Divide the hearts in to groups of 3.




Number of groups 6

3) Divide the diamonds in to groups of 4.



Number of groups 4

4) Divide the ovals in to groups of 3.



Number of groups 5

5) Divide the rectangles in to groups of 4.



Number of groups 2