



Divisible by 6

Name _____

Score _____

DR:06

1) Color the right box.

a) Is 2,478 divisible by 6?

Yes

No

a) Is 543 divisible by 6?

Yes

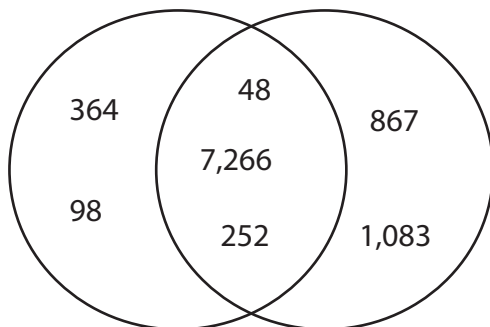
No

2) Complete the table.

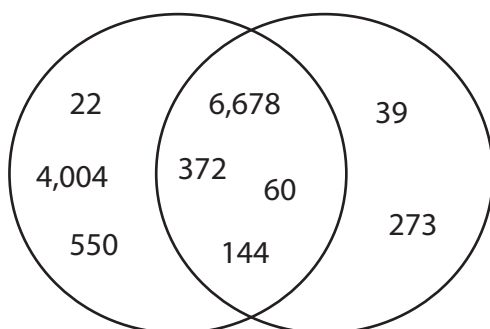
	348	75	4,074	202
Divisible by 2				
Divisible by 3				
Divisible by 6				

3) Observe the venn diagram and write the numbers that are divisible by 6.

i) Divisible by 2 Divisible by 3



ii) Divisible by 2 Divisible by 3





Divisible by 6

Name _____

Score _____

DR:06

Answer key

1) Color the right box.

a) Is 2,478 divisible by 6?

Yes

No

a) Is 543 divisible by 6?

Yes

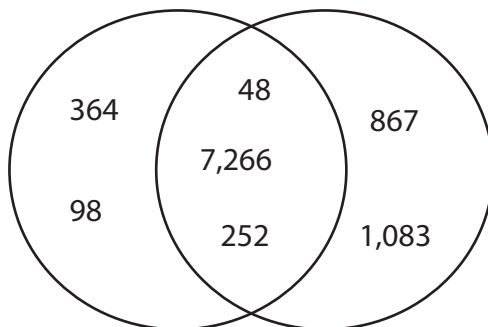
No

2) Complete the table.

	348	75	4,074	202
Divisible by 2	<input checked="" type="checkbox"/>	<input type="checkbox"/>	<input checked="" type="checkbox"/>	<input checked="" type="checkbox"/>
Divisible by 3	<input checked="" type="checkbox"/>	<input checked="" type="checkbox"/>	<input checked="" type="checkbox"/>	<input type="checkbox"/>
Divisible by 6	<input checked="" type="checkbox"/>	<input type="checkbox"/>	<input checked="" type="checkbox"/>	<input type="checkbox"/>

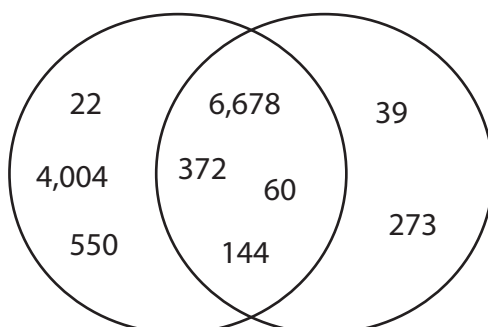
3) Observe the venn diagram and write the numbers that are divisible by 6.

i) Divisible by 2 Divisible by 3



48, 7266, and 252

ii) Divisible by 2 Divisible by 3



6678, 372, 60, and 144