



TYPES OF TRIANGLES


Name _____

Score _____

CT:27

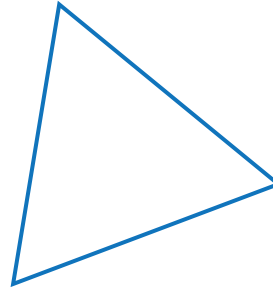
Choose the correct option.

1)



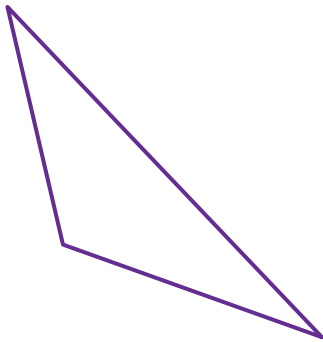
- a) Acute
- b) Right isosceles
- c) Right scalene

5)




- a) Equilateral
- b) Isosceles
- c) Scalene

2)




- a) Right
- b) Obtuse
- c) Acute

6)



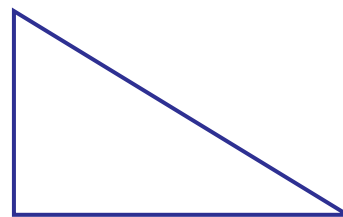
- a) Scalene
- b) Equilateral
- c) Isosceles

3)




- a) Scalene
- b) Isosceles
- c) Equilateral

7)




- a) Acute
- b) Right
- c) Obtuse

4)



- a) Right isosceles
- b) Acute isosceles
- c) Obtuse isosceles

8)



- a) Acute
- b) Obtuse
- c) Right



TYPES OF TRIANGLES

Name _____


Score _____

Answer key

CT:27

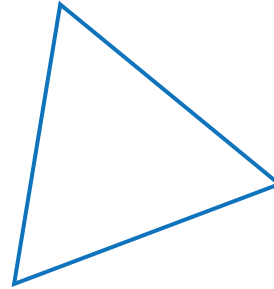
Choose the correct option.

1)



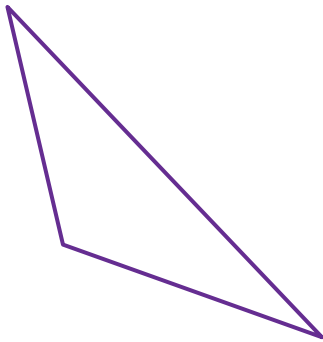
- a) Acute
- b) Right isosceles
- c) Right scalene

5)




- a) Equilateral
- b) Isosceles
- c) Scalene

2)




- a) Right
- b) Obtuse
- c) Acute

6)



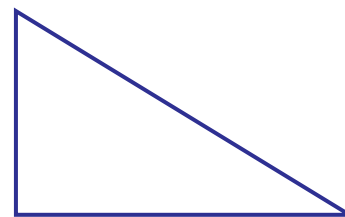
- a) Scalene
- b) Equilateral
- c) Isosceles

3)



- a) Scalene
- b) Isosceles
- c) Equilateral

7)




- a) Acute
- b) Right
- c) Obtuse

4)



- a) Right isosceles
- b) Acute isosceles
- c) Obtuse isosceles

8)



- a) Acute
- b) Obtuse
- c) Right