



TYPES OF TRIANGLES

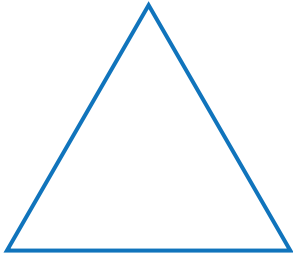
Name _____

Score _____

CT:25

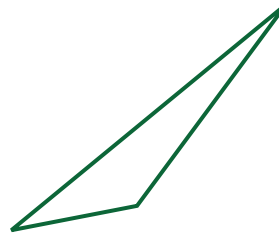
Choose the correct option.

1)



- a) Scalene
- b) Equilateral
- c) Isosceles

5)




- a) Acute
- b) Right
- c) Obtuse

2)




- a) Right
- b) Obtuse
- c) Acute

6)




- a) Equilateral
- b) Isosceles
- c) Scalene

3)




- a) Acute scalene
- b) Obtuse
- c) Acute isosceles

7)




- a) Acute
- b) Obtuse
- c) Right

4)



- a) Isosceles
- b) Scalene
- c) Equilateral

8)



- a) Obtuse isosceles
- b) Obtuse scalene
- c) Right



TYPES OF TRIANGLES

Name _____

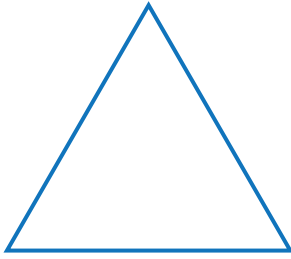
Score _____

Answer key

CT:25

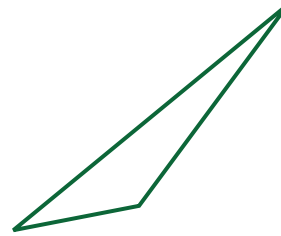
Choose the correct option.

1)




- a) Scalene
- b) Equilateral
- c) Isosceles

5)




- a) Acute
- b) Right
- c) Obtuse

2)




- a) Right
- b) Obtuse
- c) Acute

6)




- a) Equilateral
- b) Isosceles
- c) Scalene

3)




- a) Acute scalene
- b) Obtuse
- c) Acute isosceles

7)




- a) Acute
- b) Obtuse
- c) Right

4)



- a) Isosceles
- b) Scalene
- c) Equilateral

8)



- a) Obtuse isosceles
- b) Obtuse scalene
- c) Right