



TYPES OF TRIANGLES BASED ON SIDES AND ANGLES


Name _____

Score _____

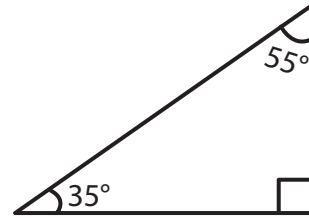
CT:20

Identify the triangles based on the sides and angles.

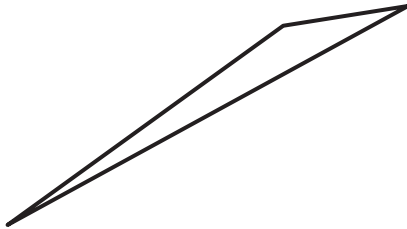
1)



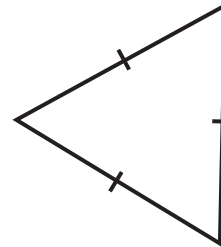
2)



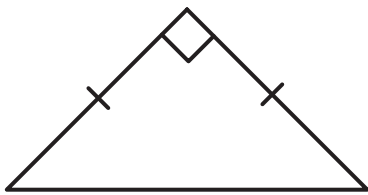
3)



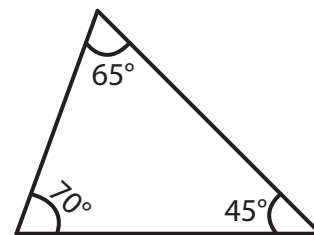
4)



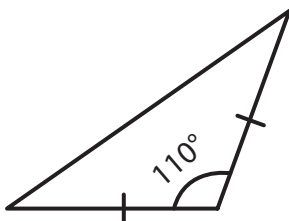
5)



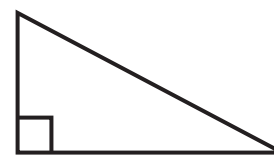
6)



7)



8)





TYPES OF TRIANGLES BASED ON SIDES AND ANGLES

Name _____


Score _____

Answer key

CT:20

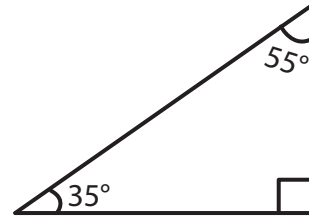
Identify the triangles based on the sides and angles.

1)



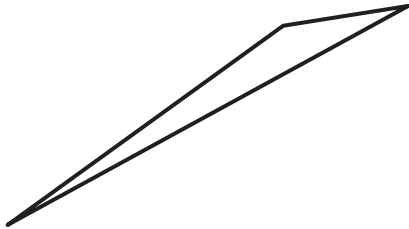
Acute isosceles triangle

2)



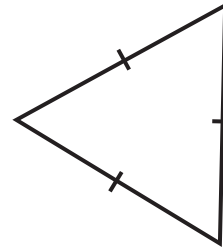
Right scalene triangle

3)



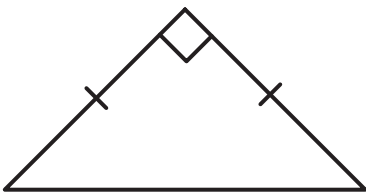
Obtuse scalene triangle

4)



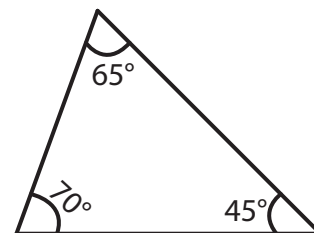
Acute equilateral triangle

5)



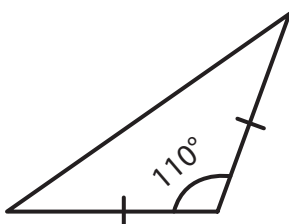
Right isosceles triangle

6)



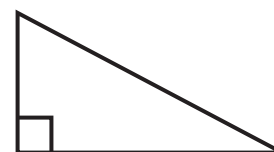
Acute scalene triangle

7)



Obtuse isosceles triangle

8)



Right scalene triangle