



TYPES OF TRIANGLES BASED ON SIDES AND ANGLES

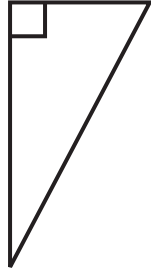
Name _____

Score _____

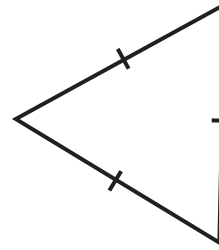
CT:19

Identify the triangles based on the sides and angles.

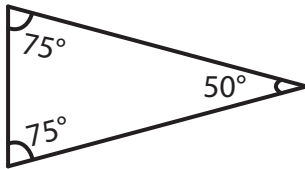
1)



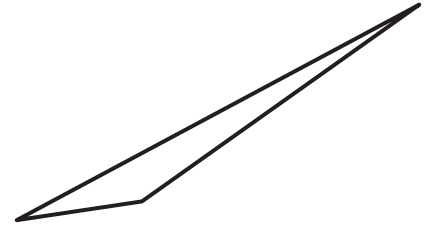
2)



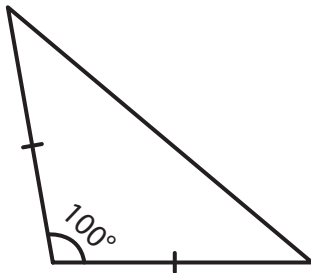
3)



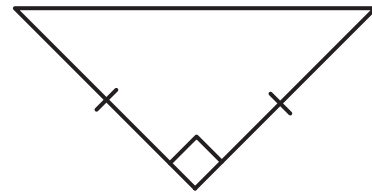
4)



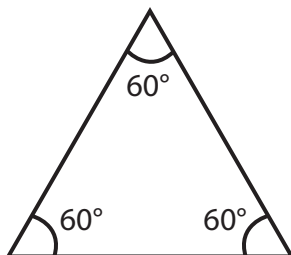
5)



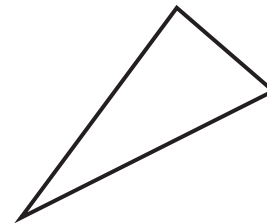
6)



7)



8)





TYPES OF TRIANGLES BASED ON SIDES AND ANGLES

Name _____

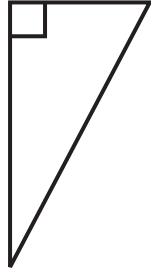
Score _____

Answer key

CT:19

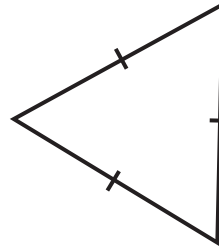
Identify the triangles based on the sides and angles.

1)



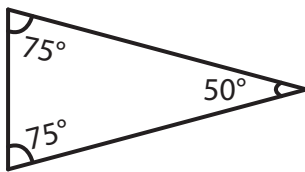
Right scalene triangle

2)



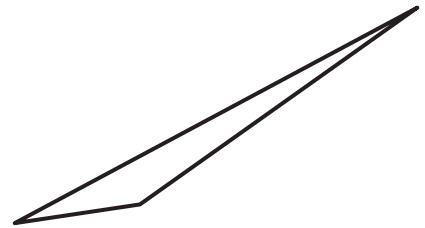
Acute equilateral triangle

3)



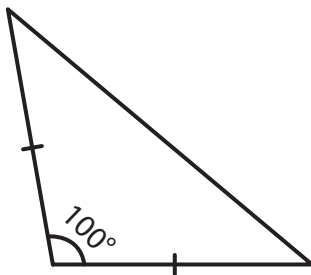
Acute isosceles triangle

4)



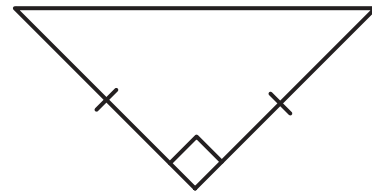
Obtuse scalene triangle

5)



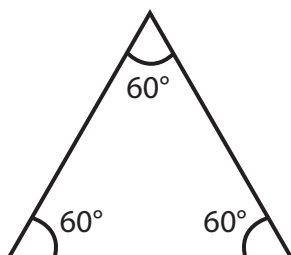
Obtuse isosceles triangle

6)



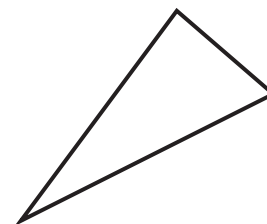
Right isosceles triangle

7)



Acute equilateral triangle

8)



Acute scalene triangle