



TYPES OF TRIANGLES BASED ON ANGLES

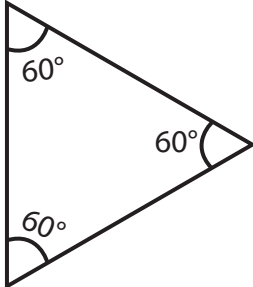
Name _____

Score _____

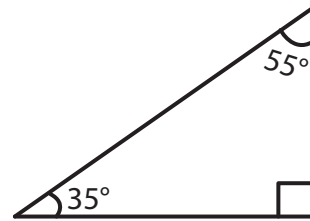
CT:15

Identify each triangle as acute, right, or obtuse.

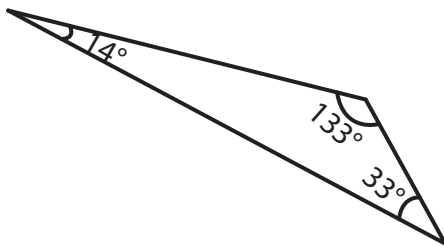
1)



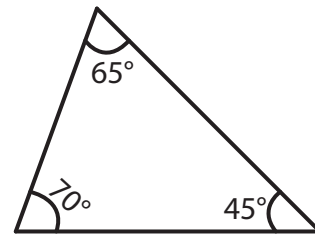
2)



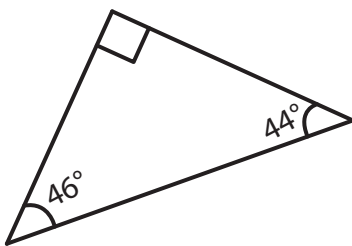
3)



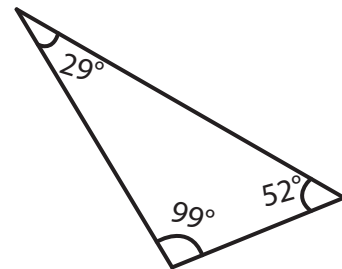
4)



5)



6)



7) $150^\circ, 10^\circ, 20^\circ$

8) $45^\circ, 45^\circ, 90^\circ$



TYPES OF TRIANGLES BASED ON ANGLES

Name _____

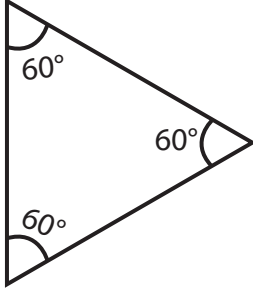
Score _____

Answer key

CT:15

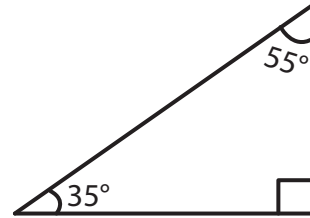
Identify each triangle as acute, right, or obtuse.

1)



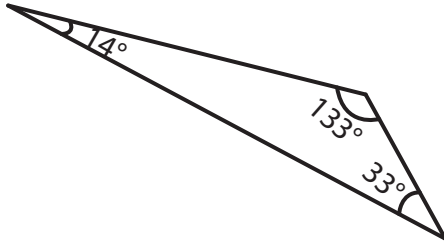
Acute triangle

2)



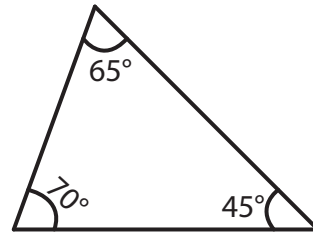
Right triangle

3)



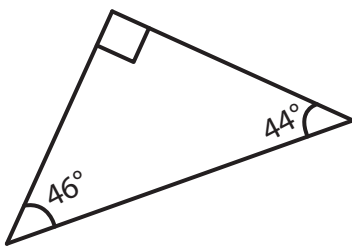
Obtuse triangle

4)



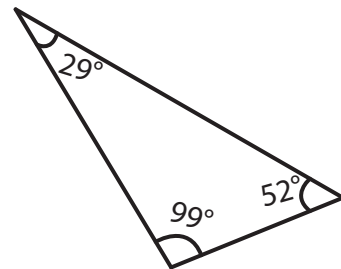
Acute triangle

5)



Right triangle

6)



Obtuse triangle

7) $150^\circ, 10^\circ, 20^\circ$

Obtuse triangle

8) $45^\circ, 45^\circ, 90^\circ$

Right triangle