



TYPES OF TRIANGLES BASED ON ANGLES

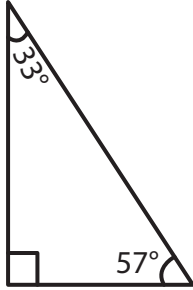
Name _____

Score _____

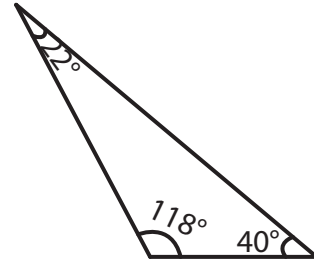
CT:13

Identify each triangle as acute, right, or obtuse.

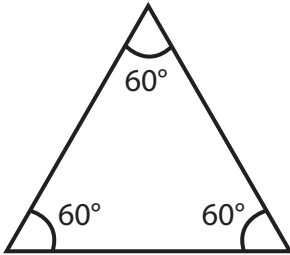
1)



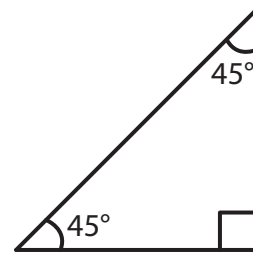
2)



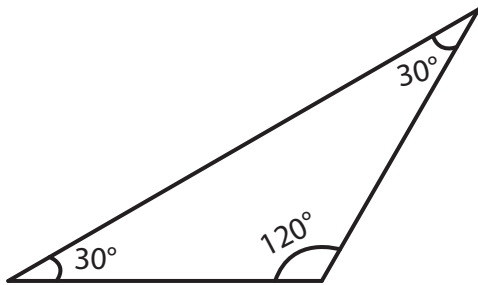
3)



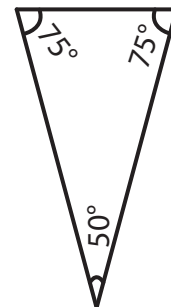
4)



5)



6)



7) $80^\circ, 60^\circ, 40^\circ$

8) $25^\circ, 130^\circ, 25^\circ$



TYPES OF TRIANGLES BASED ON ANGLES

Name _____

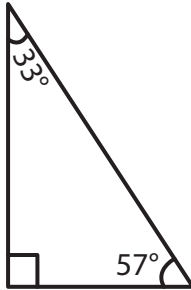
Score _____

Answer key

CT:13

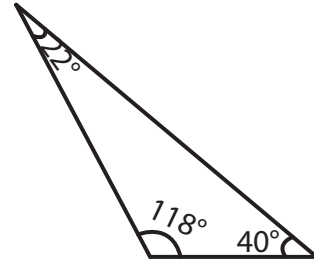
Identify each triangle as acute, right, or obtuse.

1)



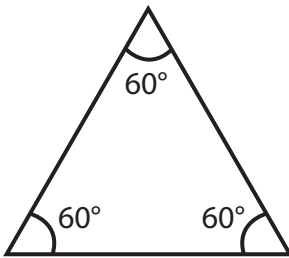
Right triangle

2)



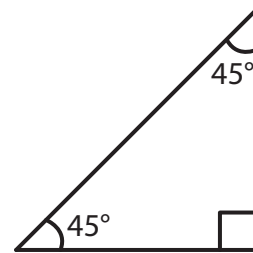
Obtuse triangle

3)



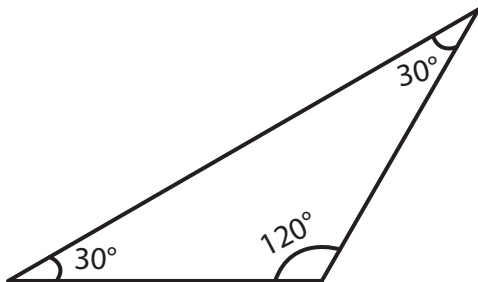
Acute triangle

4)



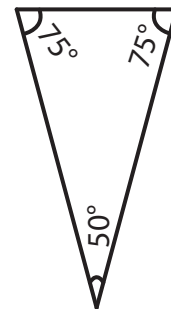
Right triangle

5)



Obtuse triangle

6)



Acute triangle

7) $80^\circ, 60^\circ, 40^\circ$

Acute triangle

8) $25^\circ, 130^\circ, 25^\circ$

Obtuse triangle