



Picture Addition


Name _____

Score _____

CS:11

Count and add the objects. Write the sum in the boxes given below.

1)




2)




3)



4)



5)





Picture Addition

Name _____

Score _____

Answer key

CS:11

Count and add the objects. Write the sum in the boxes given below.

1)

$$\begin{array}{c} \text{Candy} \\ \text{Candy} \\ \text{Candy} \end{array} + \begin{array}{c} \text{Candy} \\ \text{Candy} \\ \text{Candy} \end{array} = \boxed{12}$$

2)

$$\begin{array}{c} \text{Gift} \\ \text{Gift} \\ \text{Gift} \\ \text{Gift} \end{array} + \begin{array}{c} \text{Gift} \\ \text{Gift} \\ \text{Gift} \\ \text{Gift} \end{array} = \boxed{8}$$

3)

$$\text{Cake} + \begin{array}{c} \text{Cake} \\ \text{Cake} \end{array} = \boxed{3}$$

4)

$$\begin{array}{c} \text{Hat} \\ \text{Hat} \\ \text{Hat} \\ \text{Hat} \\ \text{Hat} \end{array} + \begin{array}{c} \text{Hat} \\ \text{Hat} \\ \text{Hat} \\ \text{Hat} \end{array} = \boxed{9}$$

5)

$$\begin{array}{c} \text{Ornament} \\ \text{Ornament} \end{array} + \begin{array}{c} \text{Ornament} \\ \text{Ornament} \end{array} = \boxed{4}$$