



COMPARING NUMBERS


Name _____

Score _____

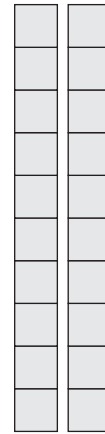
CN:36

Use the base ten blocks to find the number using tens and ones.
Compare them.

1)

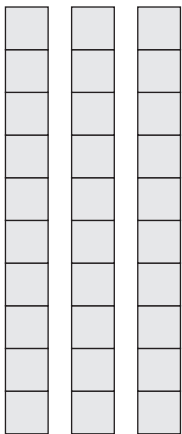


_____ Tens _____ Ones

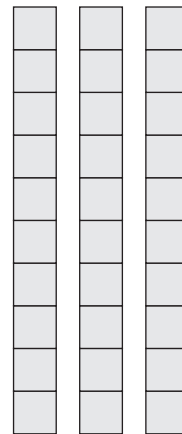


_____ Tens _____ Ones

2)



_____ Tens _____ Ones

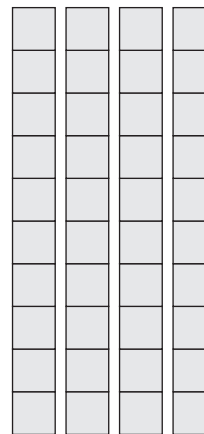


_____ Tens _____ Ones

3)



_____ Tens _____ Ones



_____ Tens _____ Ones



COMPARING NUMBERS

Name _____

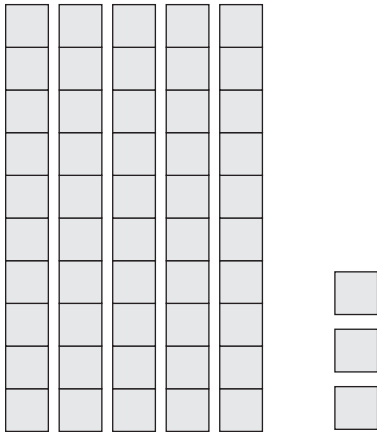
Score _____

Answer key

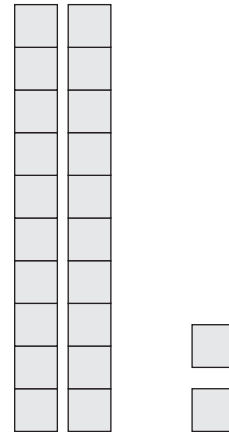
CN:36

Use the base ten blocks to find the number using tens and ones.
Compare them.

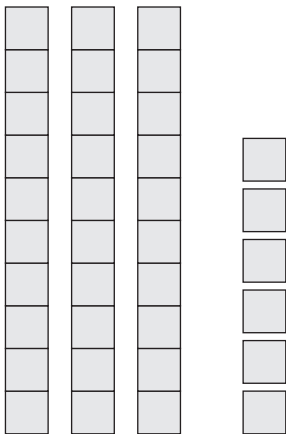
1)



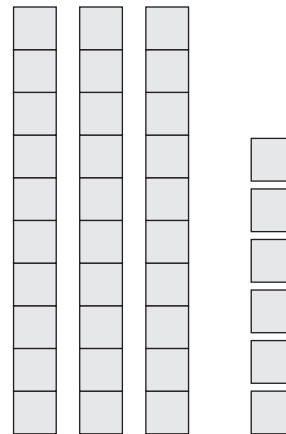
>



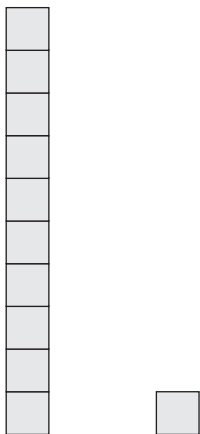
2)



=



3)



<

