



COMPARING NUMBERS



Name _____

Score _____

CN:30

Count the number of objects and fill in the blanks.

1)




How many pomegranates? _____

How many more pomegranates than oranges? _____

How many oranges? _____

2)





How many knives? _____

How many keys? _____

Are the number of knives and keys equal? _____

3)



How many more snails than fishes? _____

How many snails? _____

Are the number of fishes and snails equal? _____



COMPARING NUMBERS

Name _____



Score _____

Answer key

CN:30

Count the number of objects and fill in the blanks.

1)




How many pomegranates? 10

How many more pomegranates than oranges? 1

How many oranges? 9

2)





How many knives? 15

How many keys? 15

Are the number of knives and keys equal? Yes

3)



How many more snails than fishes? 4

How many snails? 8

Are the number of fishes and snails equal? No