



COMPARING NUMBERS


Name _____

Score _____

CN:29

Count the number of objects and fill in the blanks.

1)





How many crabs? _____

How many frogs? _____

Are the number of crabs and frogs equal? _____

2)

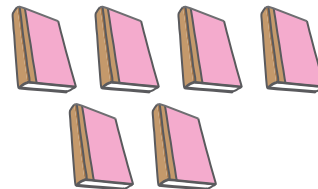



How many eggplants? _____

How many more eggplants than carrots? _____

How many carrots? _____

3)



How many more pens than books? _____

How many books? _____

Are the number of pens and books equal? _____



COMPARING NUMBERS

Name _____


Score _____

Answer key

CN:29

Count the number of objects and fill in the blanks.

1)





How many crabs? 7

How many frogs? 7

Are the number of crabs and frogs equal? Yes

2)

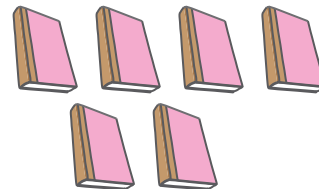



How many eggplants? 14

How many more eggplants than carrots? 6

How many carrots? 8

3)



How many more pens than books? 7

How many books? 6

Are the number of pens and books equal? No