



# DECOMPOSING 3-D SHAPES

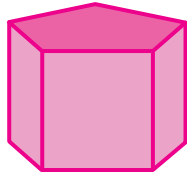
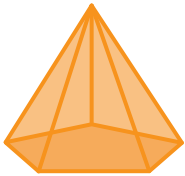
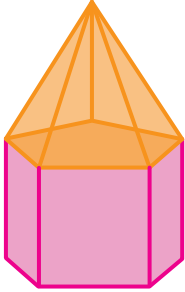
Name \_\_\_\_\_

Score \_\_\_\_\_

CD:27

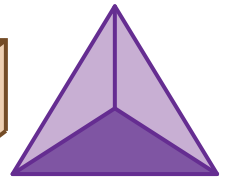
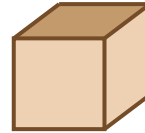
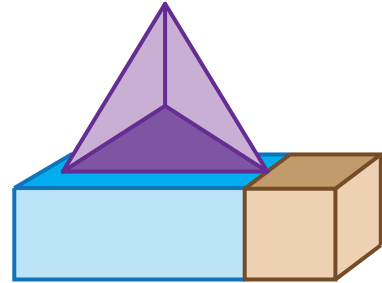
Decompose the given 3-D objects into standard 3-D shapes. Draw and name them.

1)



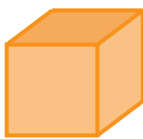
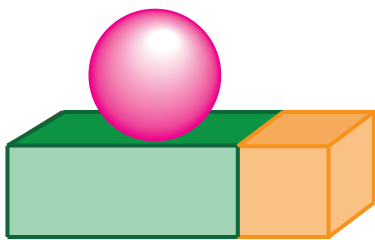
\_\_\_\_\_

2)




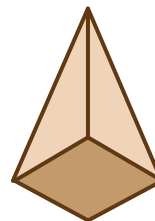
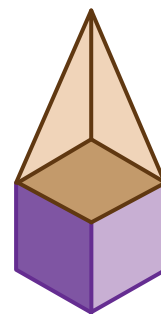
\_\_\_\_\_

3)



\_\_\_\_\_

4)



\_\_\_\_\_



# DECOMPOSING 3-D SHAPES

Name \_\_\_\_\_

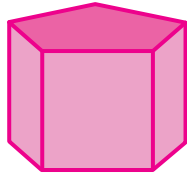
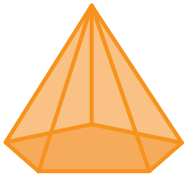
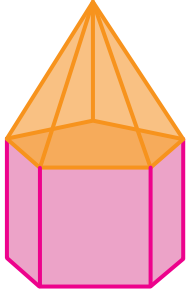
Score \_\_\_\_\_

## Answer key

CD:27

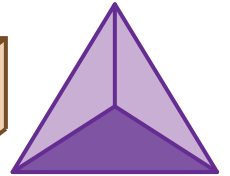
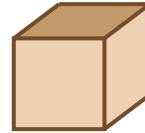
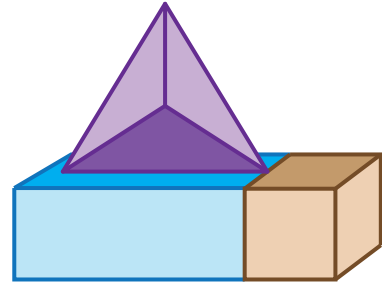
Decompose the given 3-D objects into standard 3-D shapes. Draw and name them.

1)



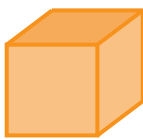
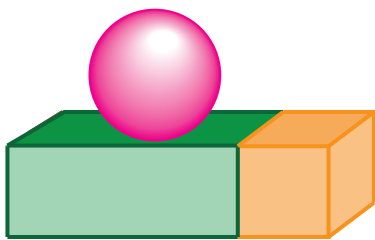
Pentagonal pyramid, Pentagonal prism

2)




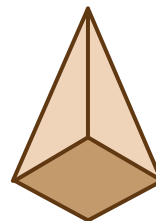
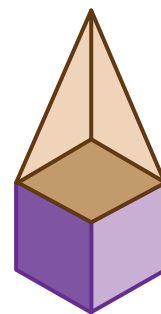
Rectangular prism, Cube, Triangular pyramid

3)



Sphere, Cube, Rectangular prism

4)



Square pyramid, Cube