



# DECOMPOSING 3-D SHAPES

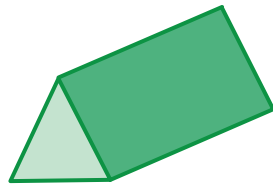
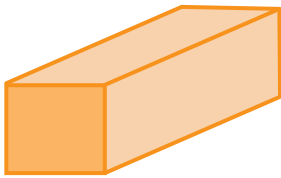
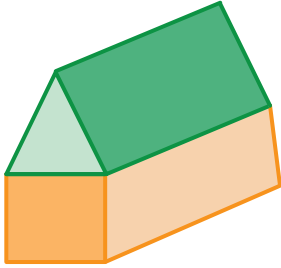
Name \_\_\_\_\_

Score \_\_\_\_\_

CD:26


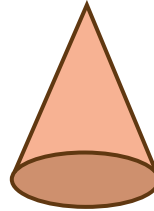
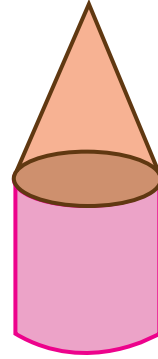
Decompose the given 3-D objects into standard 3-D shapes. Draw and name them.

1)




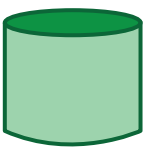
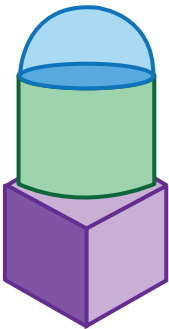
\_\_\_\_\_

2)



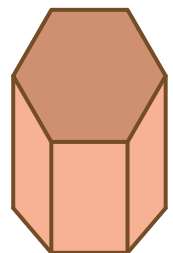

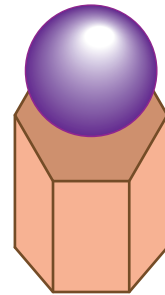
\_\_\_\_\_

3)



\_\_\_\_\_

4)



\_\_\_\_\_



# DECOMPOSING 3-D SHAPES

Name \_\_\_\_\_

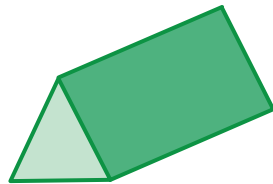
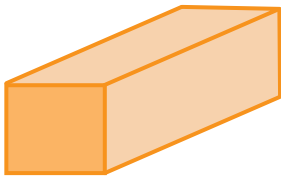
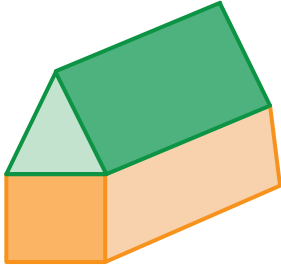
Score \_\_\_\_\_

## Answer key

CD:26


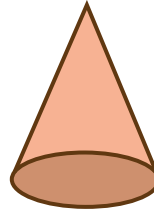
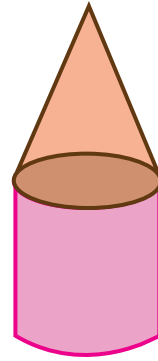
Decompose the given 3-D objects into standard 3-D shapes. Draw and name them.

1)





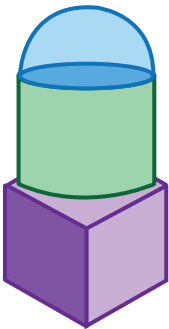
Rectangular prism, Triangular prism

2)



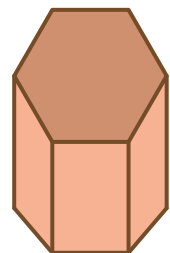

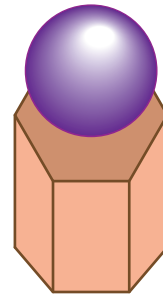
Cone, Cylinder

3)



Cylinder, Cube, Hemisphere

4)



Sphere, Hexagonal prism