



DECOMPOSING 2-D SHAPES


Name _____

Score _____

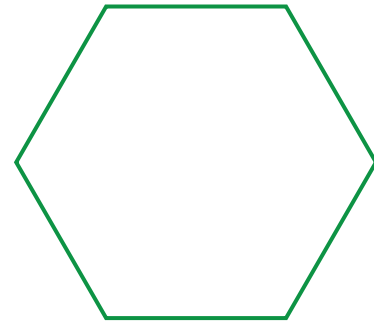
CD:15

(Answers may vary)


- 1) Decompose the rhombus into 2 triangles.



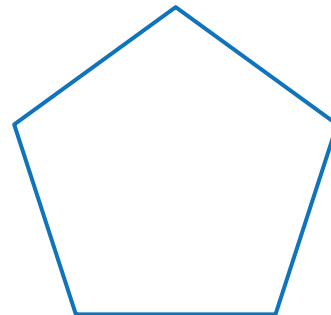
- 4) Decompose the hexagon into 2 rhombuses and 2 triangles.




- 2) Decompose the kite into 3 triangles.




- 5) Decompose the pentagon into 5 triangles.



- 3) Decompose the rectangle into 2 triangles and a square.



- 6) Decompose the triangle into a rhombus and 2 triangles.





DECOMPOSING 2-D SHAPES

Name _____

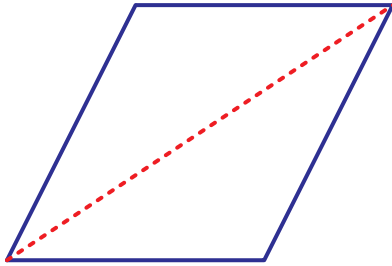
Score _____

Answer key

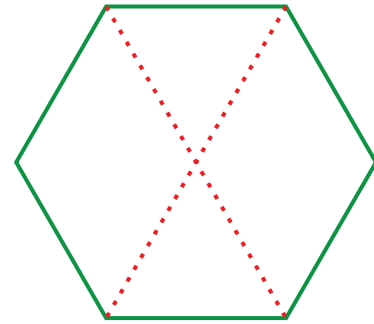
CD:15

(Answers may vary)

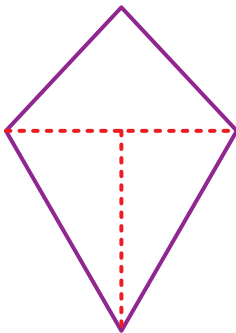
- 1) Decompose the rhombus into 2 triangles.



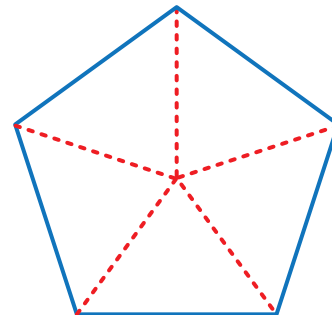
- 4) Decompose the hexagon into 2 rhombuses and 2 triangles.



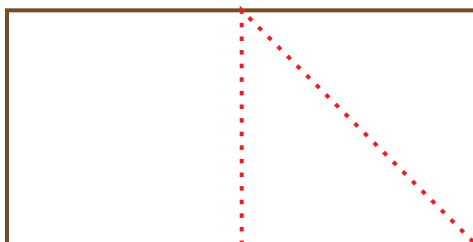
- 2) Decompose the kite into 3 triangles.



- 5) Decompose the pentagon into 5 triangles.



- 3) Decompose the rectangle into 2 triangles and a square.



- 6) Decompose the triangle into a rhombus and 2 triangles.

