



# COMPOSING 2-D SHAPES


Name \_\_\_\_\_

Score \_\_\_\_\_

CD:03

Choose from the below options, the new figures you get after decomposing each shape shown below.

1)



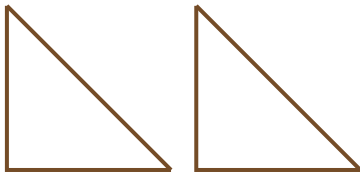
a)




b)



c)



2)




a)




b)



c)



3)



a)



b)




c)




4)




a)



b)



c)





# COMPOSING 2-D SHAPES

Name \_\_\_\_\_

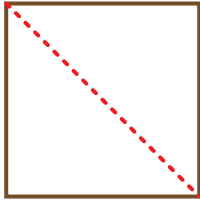
Score \_\_\_\_\_

## Answer key

CD:03

Choose from the below options, the new figures you get after decomposing each shape shown below.

1)



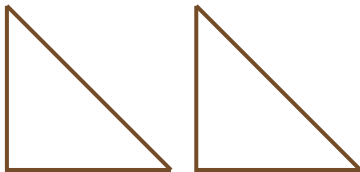
a)



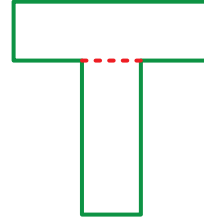
b)



c)



2)



a)



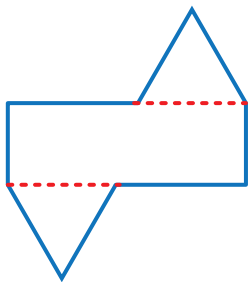
b)



c)



3)



a)



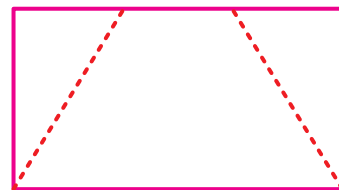
b)




c)



4)



a)



b)



c)

