



ORDERING FRACTIONS











Name _____

Score _____






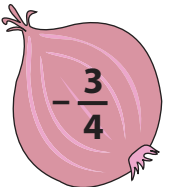
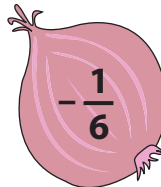
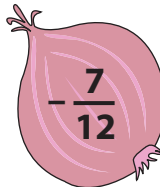
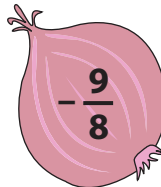
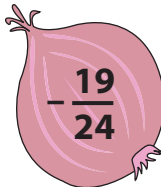
CO:42

Arrange the fractions given on each item and write them in increasing order.

1)













2)










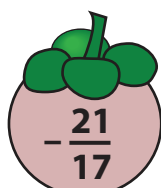


Arrange the fractions given on each item and write them in decreasing order.

1)



2)





ORDERING FRACTIONS

Name _____

Score _____

Answer key

CO:42

Arrange the fractions given on each item and write them in increasing order.

1)

| | | | | |
|--|--|--|--|--|
| | | | | |
| | | | | |

2)

| | | | | |
|--|--|--|--|--|
| | | | | |
| | | | | |

Arrange the fractions given on each item and write them in decreasing order.

1)

| | | | | |
|--|--|--|--|--|
| | | | | |
| | | | | |

2)

| | | | | |
|--|--|--|--|--|
| | | | | |
| | | | | |