



ORDERING FRACTIONS

Name _____

Score _____

CO:41

Arrange the fractions given on each item and write them in increasing order.

1)

2)

Arrange the fractions given on each item and write them in decreasing order.

1)

2)



ORDERING FRACTIONS

Name _____


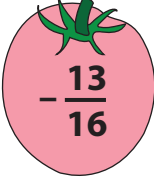

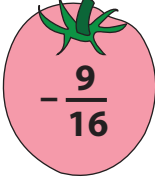






Score _____

Answer key

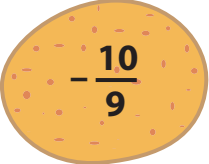
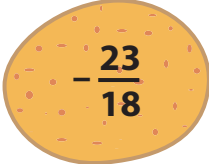
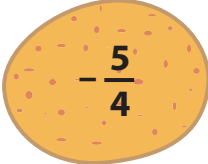

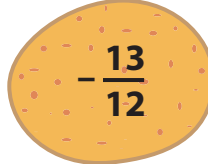
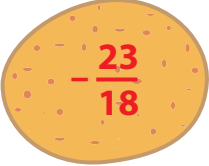
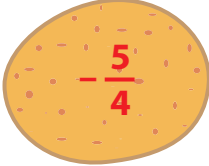
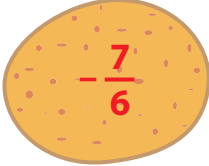
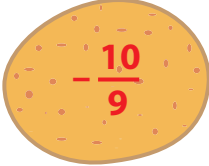
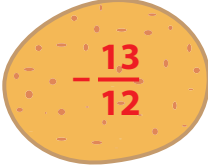
CO:41

Arrange the fractions given on each item and write them in increasing order.

1)



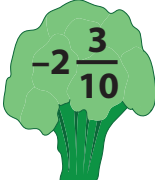

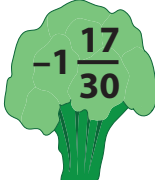



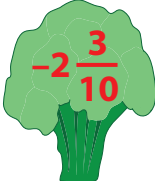

 $-\frac{15}{16}$	 $-\frac{13}{16}$	 $-\frac{21}{16}$	 $-\frac{9}{16}$	 $-\frac{19}{16}$
 $-\frac{21}{22}$	 $-\frac{19}{22}$	 $-\frac{15}{22}$	 $-\frac{13}{22}$	 $-\frac{9}{22}$

2)







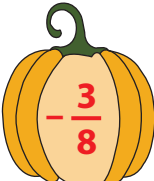



 $-\frac{10}{9}$	 $-\frac{23}{18}$	 $-\frac{5}{4}$	 $-\frac{7}{6}$	 $-\frac{13}{12}$
 $-\frac{23}{18}$	 $-\frac{5}{4}$	 $-\frac{7}{6}$	 $-\frac{10}{9}$	 $-\frac{13}{12}$

Arrange the fractions given on each item and write them in decreasing order.

1)

 $-2\frac{1}{5}$	 $-1\frac{9}{20}$	 $-2\frac{3}{10}$	 $-3\frac{1}{15}$	 $-1\frac{17}{30}$
 $-1\frac{9}{20}$	 $-1\frac{17}{30}$	 $-2\frac{1}{5}$	 $-2\frac{3}{10}$	 $-3\frac{1}{15}$

2)

 $-\frac{7}{8}$	 $-\frac{5}{8}$	 $-\frac{9}{8}$	 $-\frac{1}{8}$	 $-\frac{3}{8}$
 $-\frac{1}{8}$	 $-\frac{3}{8}$	 $-\frac{5}{8}$	 $-\frac{7}{8}$	 $-\frac{9}{8}$