



ORDERING FRACTIONS

Name _____

Score _____

CO:33

Look at the shaded part in each pie. Write the fraction (shaded part), order them and number from 1- 4 in increasing order.

1)

3	2	1	4

2)

3)

Look at the shaded part in each pie. Write the fraction (shaded part), order them and number from 1- 4 in decreasing order..

1)

2)

3)



ORDERING FRACTIONS

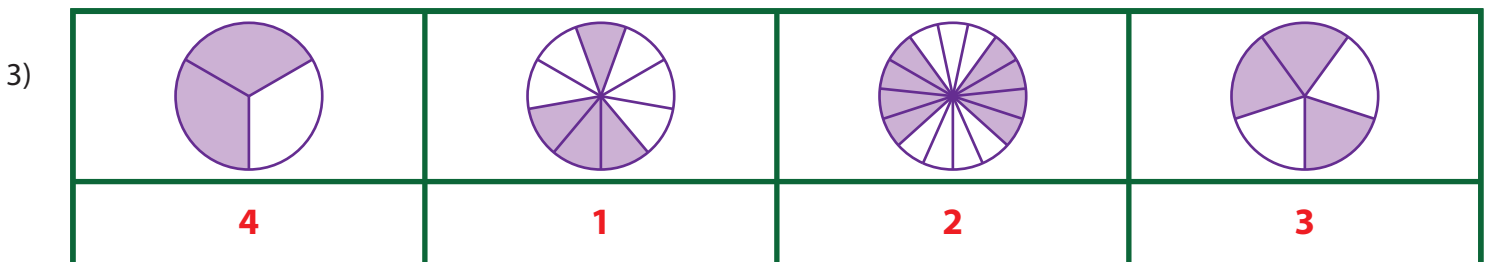
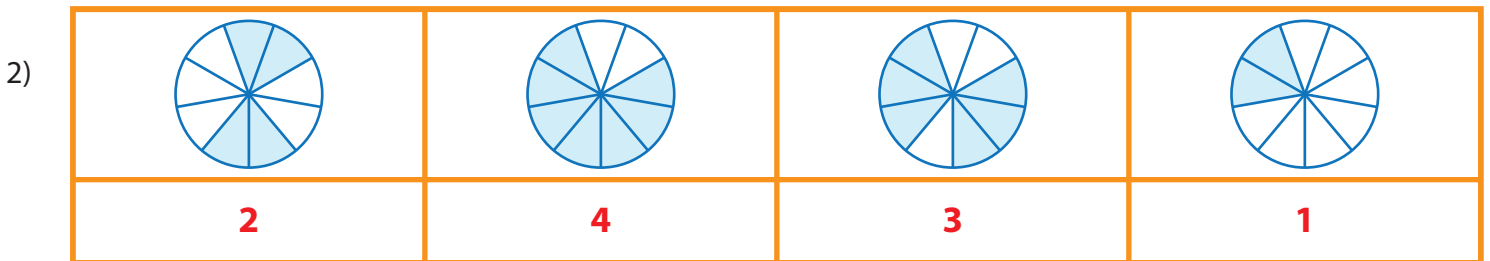
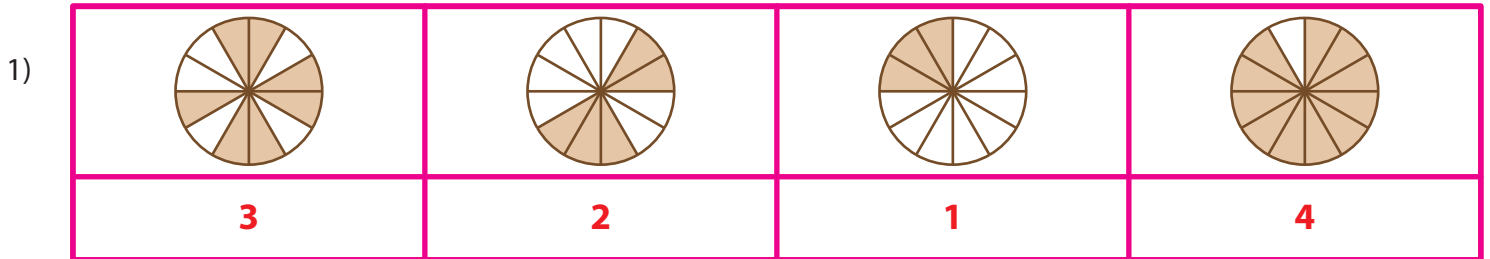
Name _____

Score _____

Answer key

CO:33

Look at the shaded part in each pie. Write the fraction (shaded part), order them and number from 1- 4 in increasing order.



Look at the shaded part in each pie. Write the fraction (shaded part), order them and number from 1- 4 in decreasing order..

