



# COMPARING FRACTIONS

Name \_\_\_\_\_

Score \_\_\_\_\_

CO:13

Compare the fractions using the symbols  $<$ ,  $>$  or  $=$ .

1)  $\frac{3}{10}$    $\frac{9}{10}$

2)  $2\frac{1}{2}$    $2\frac{1}{3}$

3)  $\frac{5}{9}$    $\frac{8}{9}$

4)  $\frac{21}{28}$    $\frac{24}{32}$

5)  $\frac{28}{25}$    $\frac{27}{25}$

6)  $1\frac{9}{21}$    $1\frac{13}{21}$

7)  $\frac{2}{6}$    $\frac{3}{9}$

8)  $\frac{2}{5}$    $\frac{1}{5}$

9)  $\frac{4}{12}$    $\frac{5}{15}$

10)  $2\frac{6}{17}$    $1\frac{14}{17}$

11)  $\frac{7}{4}$    $\frac{9}{2}$

12)  $\frac{16}{22}$    $\frac{8}{11}$

13)  $5\frac{7}{8}$    $4\frac{3}{8}$

14)  $\frac{15}{19}$    $\frac{18}{19}$



# COMPARING FRACTIONS

Name \_\_\_\_\_


Score \_\_\_\_\_


## Answer key


CO:13


Compare the fractions using the symbols  $<$ ,  $>$  or  $=$ .

1)  $\frac{3}{10}$    $\frac{9}{10}$


2)  $2\frac{1}{2}$    $2\frac{1}{3}$

3)  $\frac{5}{9}$    $\frac{8}{9}$


4)  $\frac{21}{28}$    $\frac{24}{32}$

5)  $\frac{28}{25}$    $\frac{27}{25}$

6)  $1\frac{9}{21}$    $1\frac{13}{21}$


7)  $\frac{2}{6}$    $\frac{3}{9}$

8)  $\frac{2}{5}$    $\frac{1}{5}$

9)  $\frac{4}{12}$    $\frac{5}{15}$

10)  $2\frac{6}{17}$    $1\frac{14}{17}$

11)  $\frac{7}{4}$    $\frac{9}{2}$

12)  $\frac{16}{22}$    $\frac{8}{11}$

13)  $5\frac{7}{8}$    $4\frac{3}{8}$

14)  $\frac{15}{19}$    $\frac{18}{19}$