



Interior Angles

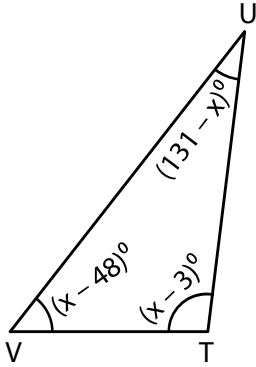
Name _____

Score _____

AT:12

Find x and also the three angles.

1)



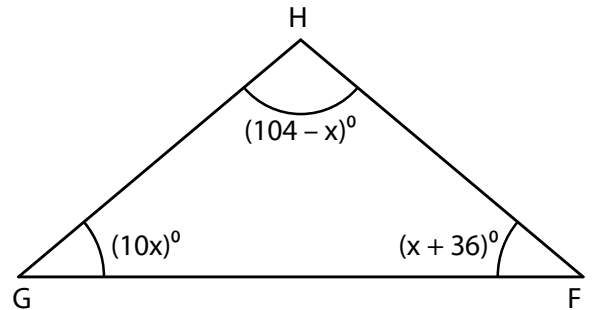
$x =$

$\angle T =$

$\angle U =$

$\angle V =$

2)



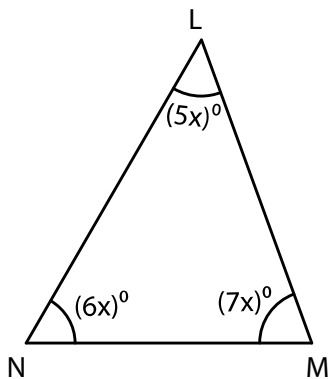
$x =$

$\angle F =$

$\angle G =$

$\angle H =$

3)



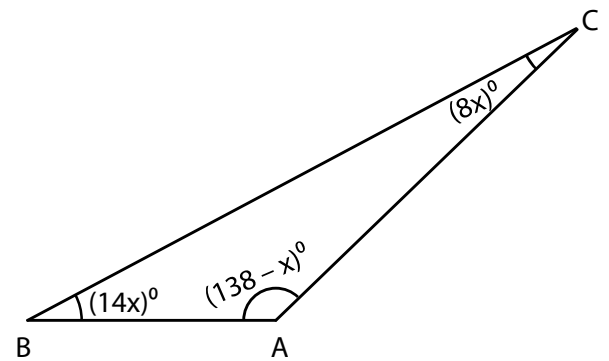
$x =$

$\angle L =$

$\angle M =$

$\angle N =$

4)



$x =$

$\angle A =$

$\angle B =$

$\angle C =$



Interior Angles

Name _____

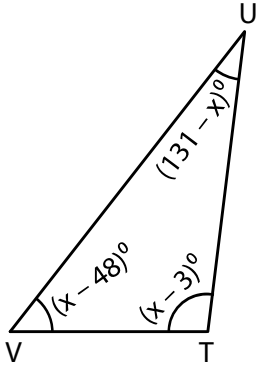
Score _____

Answer key

AT:12

Find x and also the three angles.

1)



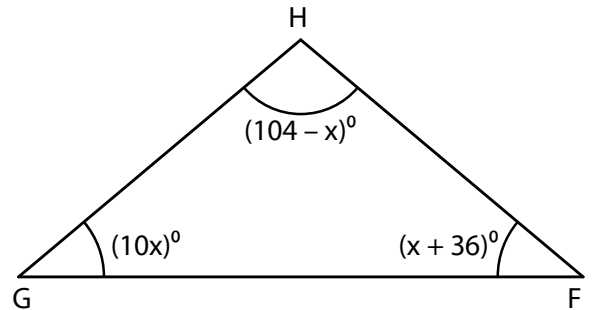
$x =$ **100**

$\angle T =$ **97°**

$\angle U =$ **31°**

$\angle V =$ **52°**

2)



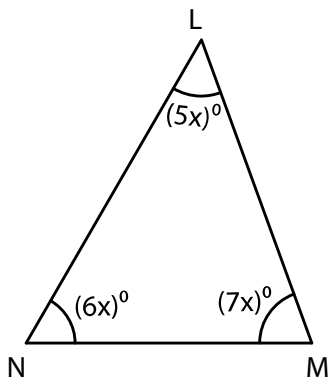
$x =$ **4**

$\angle F =$ **40°**

$\angle G =$ **40°**

$\angle H =$ **100°**

3)



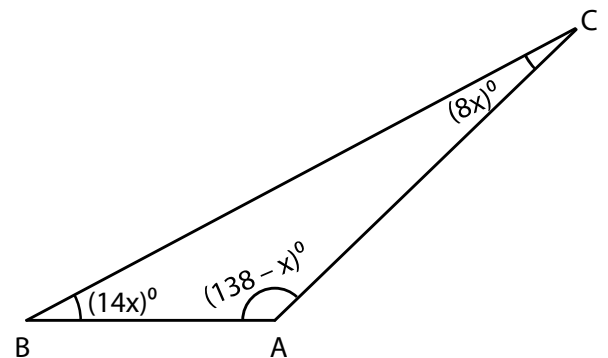
$x =$ **10**

$\angle L =$ **50°**

$\angle M =$ **70°**

$\angle N =$ **60°**

4)



$x =$ **2**

$\angle A =$ **136°**

$\angle B =$ **28°**

$\angle C =$ **16°**