



CLASSIFYING ANGLES

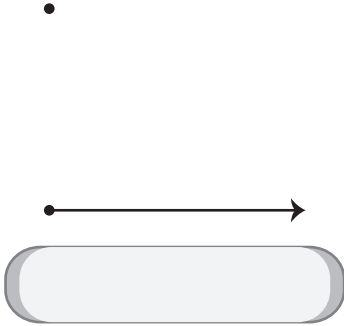
Name _____

Score _____

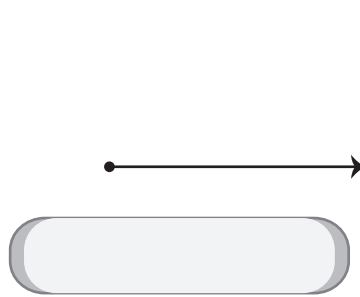
AT:11

Join the points to form angles and state if they are acute, right or obtuse angle.

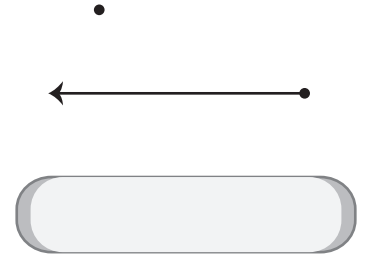
1)



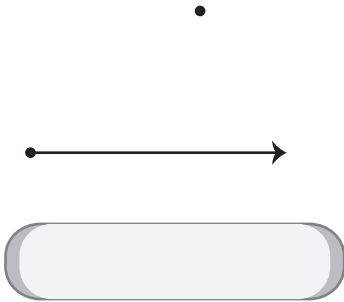
2)



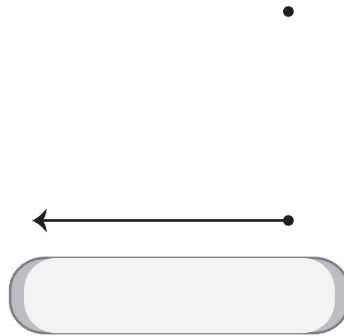
3)



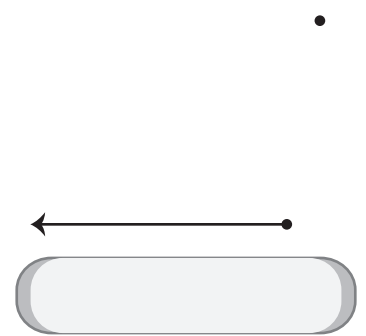
4)



5)



6)



Draw angles for each type mentioned below.

1) A reflex angle

2) An acute angle

3) A reflex angle

4) An obtuse angle

5) A right angle

6) A straight angle



CLASSIFYING ANGLES

Name _____

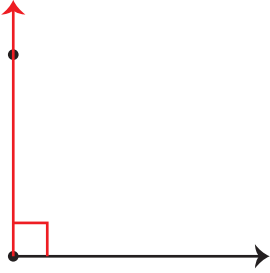
Score _____

Answer key

AT:11

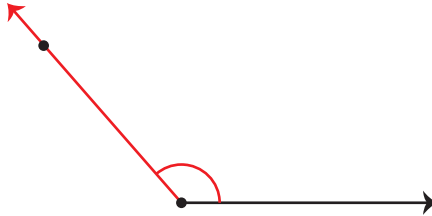
Join the points to form angles and state if they are acute, right or obtuse angle.

1)




Right angle

2)



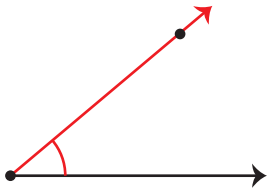
Obtuse angle

3)



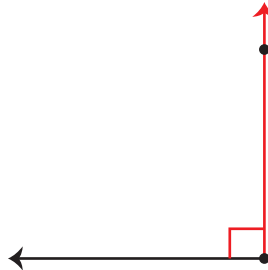
Acute angle

4)



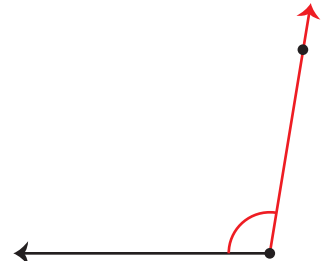
Acute angle

5)



Right angle

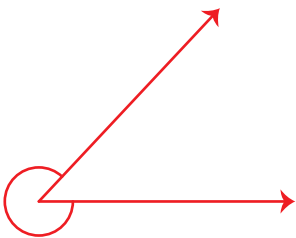
6)



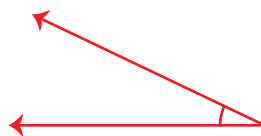
Obtuse angle

Draw angles for each type mentioned below.


1) A reflex angle



2) An acute angle



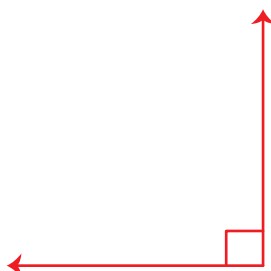
3) A reflex angle



4) An obtuse angle



5) A right angle



6) A straight angle

