



CLASSIFYING ANGLES

Name _____

Score _____

AT:09

Join the points to form angles and state if they are acute, right or obtuse angle.

1)



2)



3)



4)



5)



6)



Draw angles for each type mentioned below.

1) An acute angle

2) A straight angle

3) A reflex angle

4) A right angle

5) An acute angle

6) An obtuse angle



CLASSIFYING ANGLES

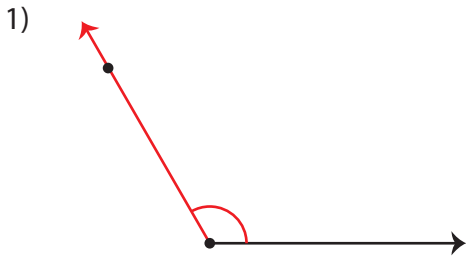
Name _____

Score _____

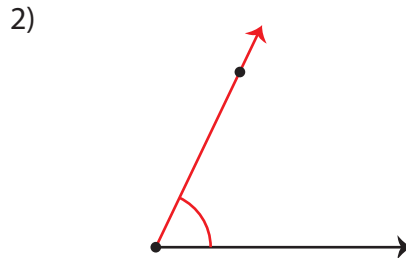
Answer key

AT:09

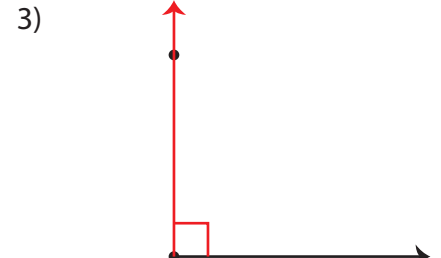
Join the points to form angles and state if they are acute, right or obtuse angle.



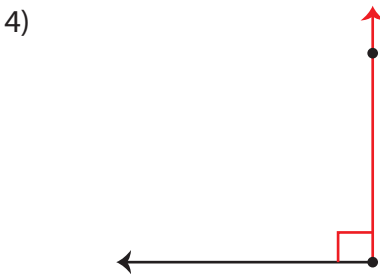
Obtuse angle



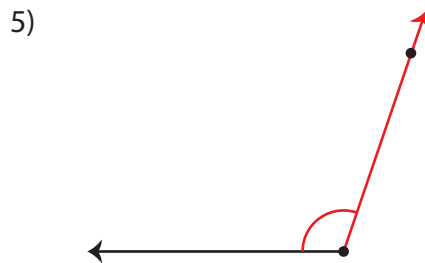
Acute angle



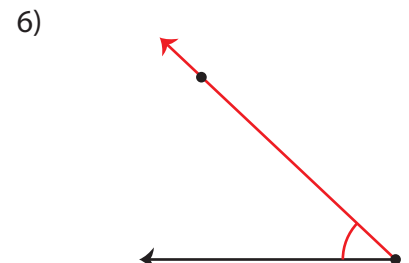
Right angle



Right angle



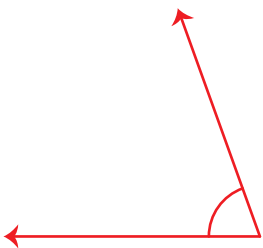
Obtuse angle



Acute angle

Draw angles for each type mentioned below.

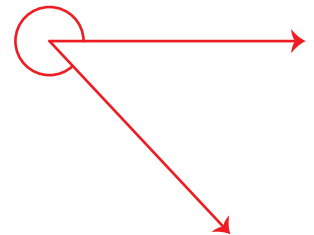
1) An acute angle



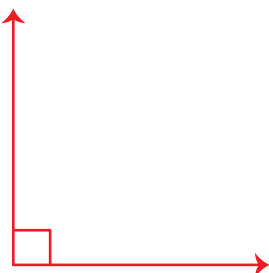
2) A straight angle



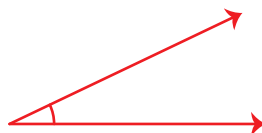
3) A reflex angle



4) A right angle



5) An acute angle



6) An obtuse angle

