



Add the Shapes


Name _____

Score _____

AS:III:16

Count and add the shapes.

1)



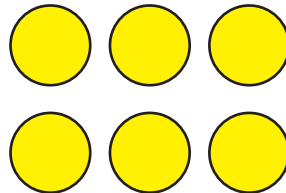

+



=



2)



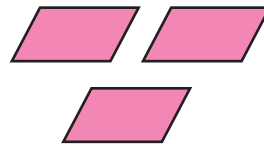
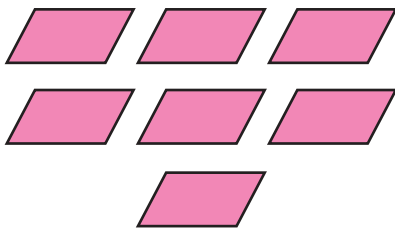
+



=



3)



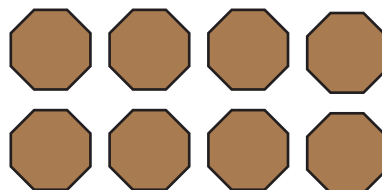
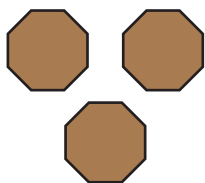
+



=




4)



+



=





Add the Shapes

Name _____


Score _____

Answer key

AS:III:16

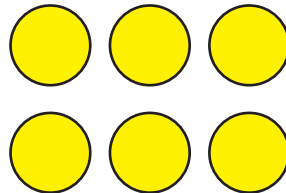

Count and add the shapes.

1)



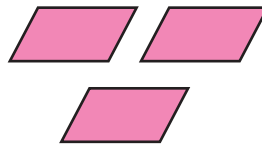
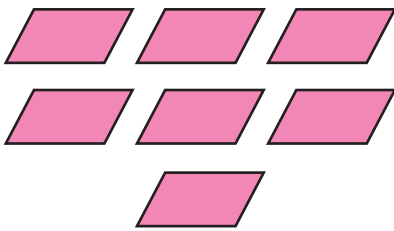
$$\boxed{8} + \boxed{4} = \boxed{12}$$

2)



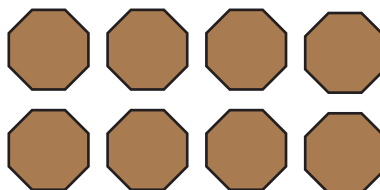
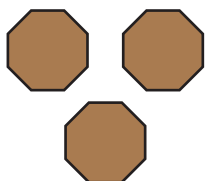
$$\boxed{3} + \boxed{6} = \boxed{9}$$

3)



$$\boxed{7} + \boxed{3} = \boxed{10}$$

4)



$$\boxed{3} + \boxed{8} = \boxed{11}$$