



# Picture Addition

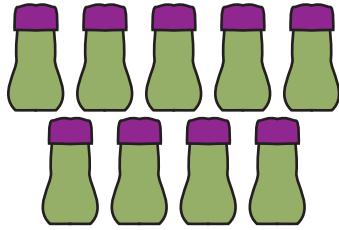
Name \_\_\_\_\_

Score \_\_\_\_\_

AS:III:05

Count the pictures, write them down and sum up.


1)



+

=

2)



+

=


3)



+

=

4)



+

=



# Picture Addition

Name \_\_\_\_\_

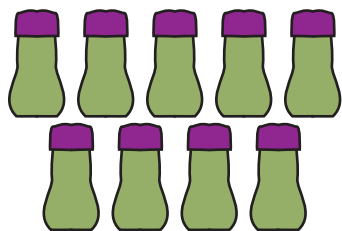
Score \_\_\_\_\_

Answer key

AS:III:05



Count the pictures, write them down and sum up.

1)



$$\boxed{9} + \boxed{3} = \boxed{12}$$

2)





$$\boxed{12} + \boxed{6} = \boxed{18}$$

3)



$$\boxed{4} + \boxed{10} = \boxed{14}$$

4)



$$\boxed{8} + \boxed{8} = \boxed{16}$$