





# FRACTIONS - NUMBER LINES

Name \_\_\_\_\_

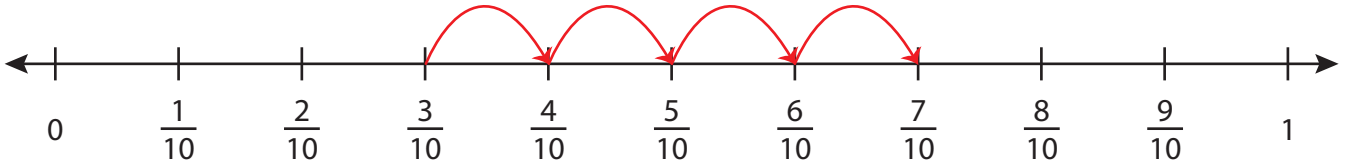
Score \_\_\_\_\_

## Answer key

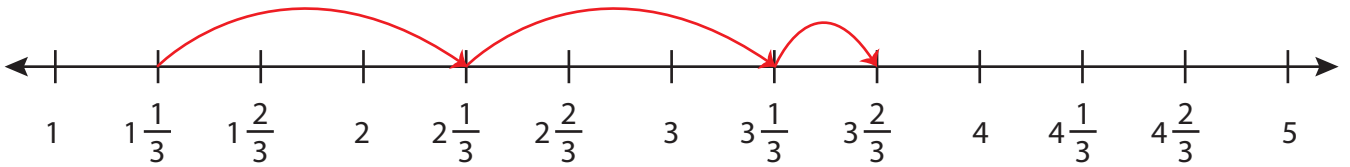
AS:33

Draw the hops.

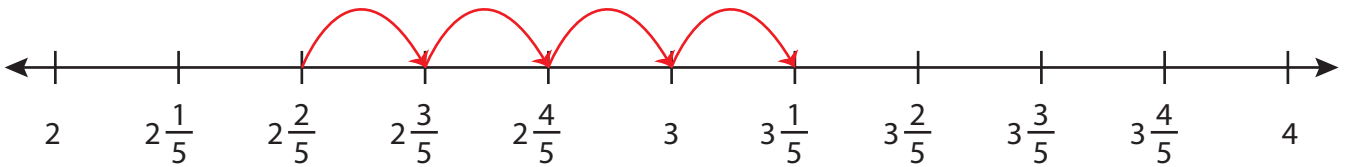
1)  $\frac{3}{10} + \frac{4}{10} = \underline{\frac{7}{10}}$



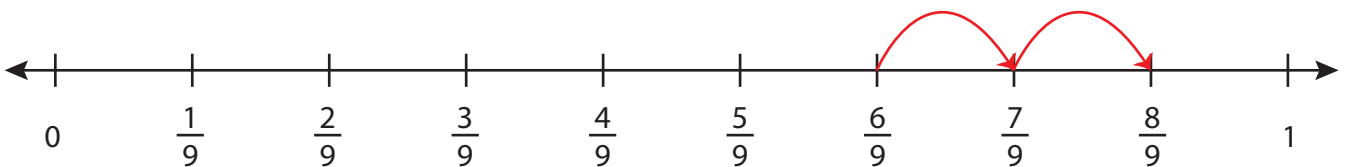
2)  $1\frac{1}{3} + 2\frac{1}{3} = \underline{3\frac{2}{3}}$



3)  $2\frac{2}{5} + \frac{4}{5} = \underline{3\frac{1}{5}}$



4)  $\frac{6}{9} + \frac{2}{9} = \underline{\frac{8}{9}}$



5)  $4\frac{1}{2} + 1\frac{1}{2} = \underline{6}$

