



# FRACTIONS - NUMBER LINES

Name \_\_\_\_\_

Score \_\_\_\_\_

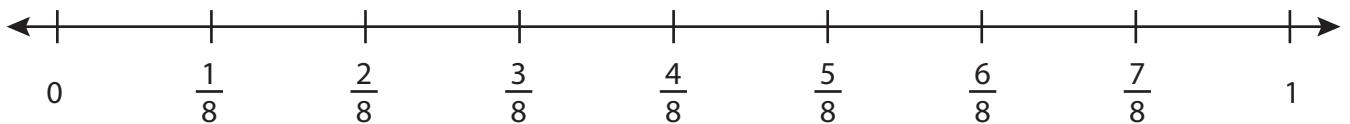
AS:32

Draw the hops.

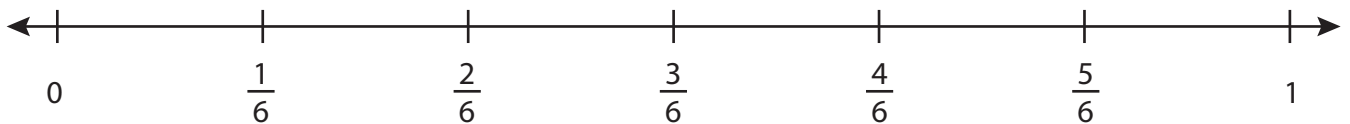
1)  $3\frac{3}{5} + \frac{2}{5} =$            4          



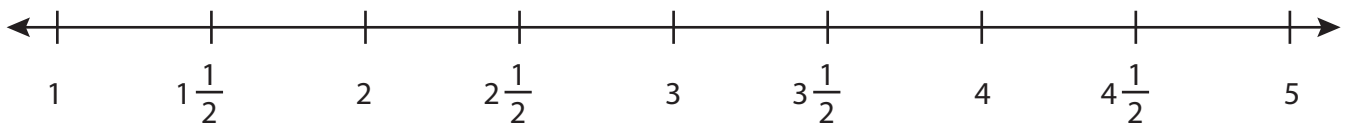
2)  $\frac{3}{8} + \frac{1}{8} =$  \_\_\_\_\_



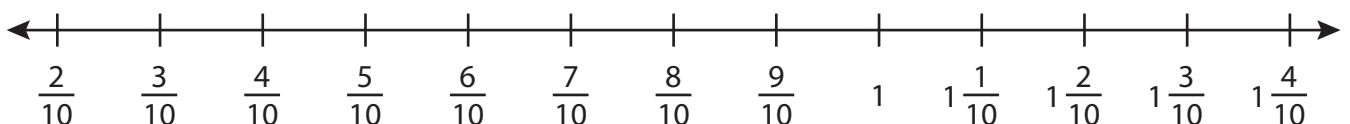
3)  $\frac{1}{6} + \frac{4}{6} =$  \_\_\_\_\_



4)  $1\frac{1}{2} + 3\frac{1}{2} =$  \_\_\_\_\_



5)  $\frac{3}{10} + 1\frac{1}{10} =$  \_\_\_\_\_





# FRACTIONS - NUMBER LINES

Name \_\_\_\_\_

Score \_\_\_\_\_

## Answer key

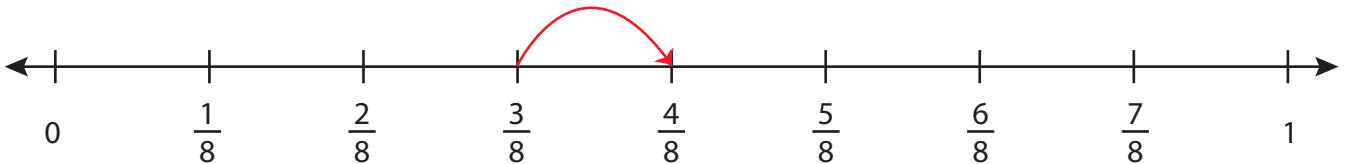
AS:32

Draw the hops.

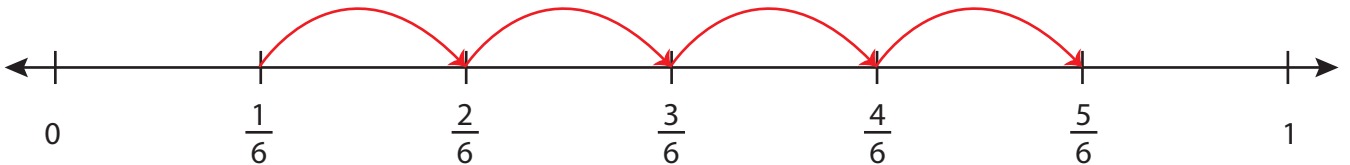
1)  $3\frac{3}{5} + \frac{2}{5} = \underline{\quad 4 \quad}$



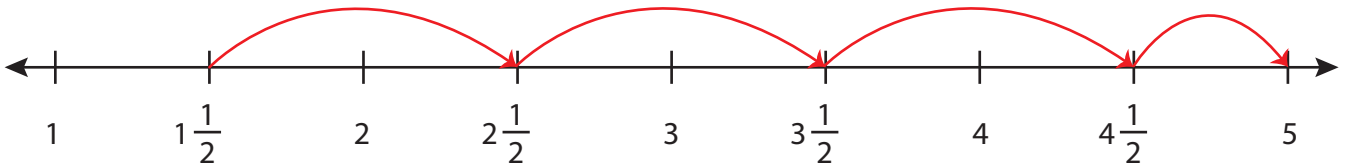
2)  $\frac{3}{8} + \frac{1}{8} = \underline{\quad \frac{4}{8} \quad}$



3)  $\frac{1}{6} + \frac{4}{6} = \underline{\quad \frac{5}{6} \quad}$



4)  $1\frac{1}{2} + 3\frac{1}{2} = \underline{\quad 5 \quad}$



5)  $\frac{3}{10} + 1\frac{1}{10} = \underline{\quad 1\frac{4}{10} \quad}$

