



# FRACTIONS - NUMBER LINES

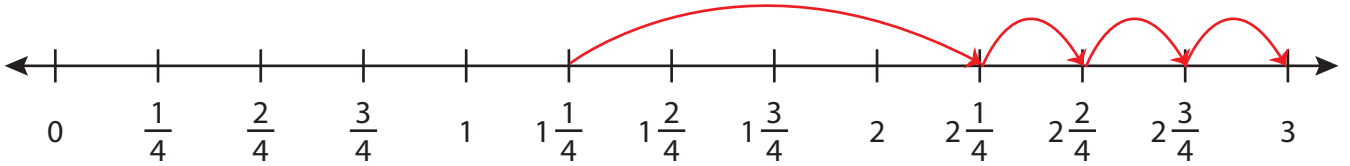
Name \_\_\_\_\_

Score \_\_\_\_\_

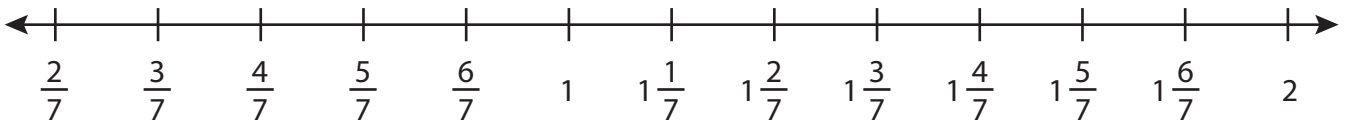
AS:31

Draw the hops.

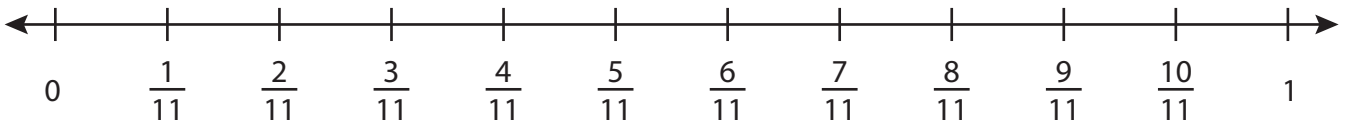
1)  $1\frac{1}{4} + 1\frac{3}{4} =$                       **3**



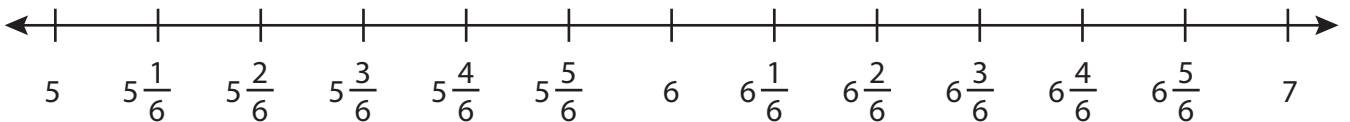
2)  $\frac{5}{7} + \frac{5}{7} =$                      



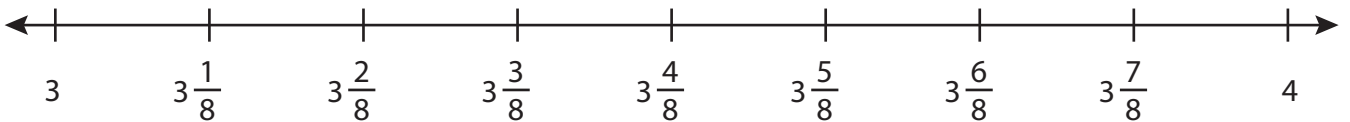
3)  $\frac{1}{11} + \frac{8}{11} =$                      



4)  $5\frac{1}{6} + 1\frac{5}{6} =$                      



5)  $3\frac{2}{8} + \frac{5}{8} =$                      





# FRACTIONS - NUMBER LINES

Name \_\_\_\_\_

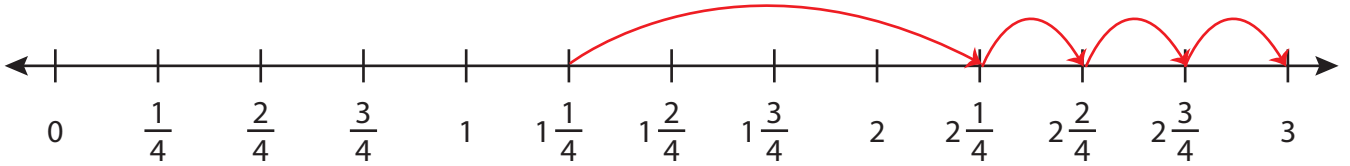
Score \_\_\_\_\_

## Answer key

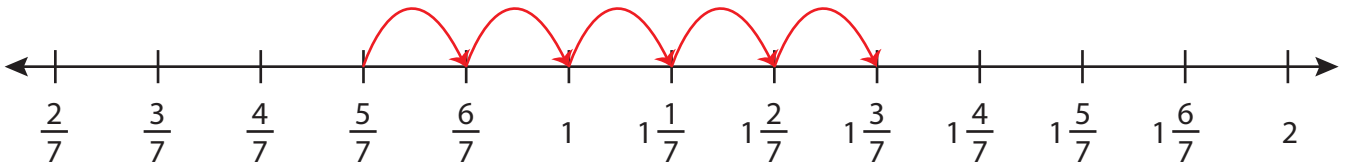
AS:31

Draw the hops.

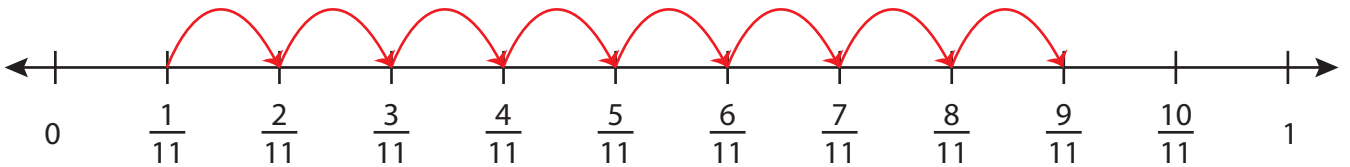
1)  $1\frac{1}{4} + 1\frac{3}{4} =$  3



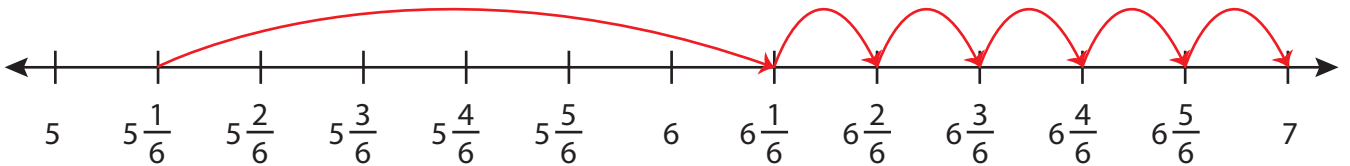
2)  $\frac{5}{7} + \frac{5}{7} =$   $1\frac{3}{7}$



3)  $\frac{1}{11} + \frac{8}{11} =$   $\frac{9}{11}$



4)  $5\frac{1}{6} + 1\frac{5}{6} =$  7



5)  $3\frac{2}{8} + \frac{5}{8} =$   $3\frac{7}{8}$

