



Area of Squares

Name _____

Score _____

AS:08

Find the area of each square from the given side length.

1) Side length = 13.5 in

Area = in²

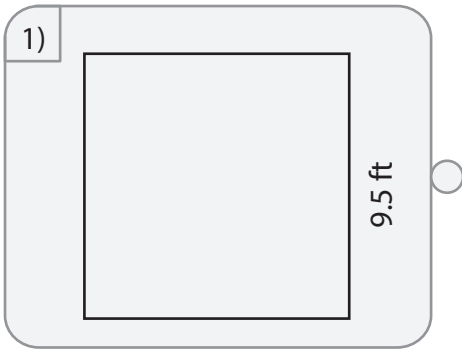
2) Side length = 1.3 ft

Area = ft²

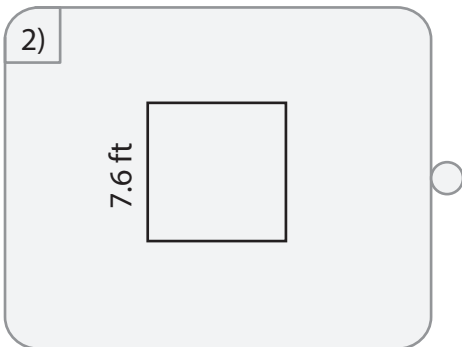
3) Side length = 7.7 yd

Area = yd²

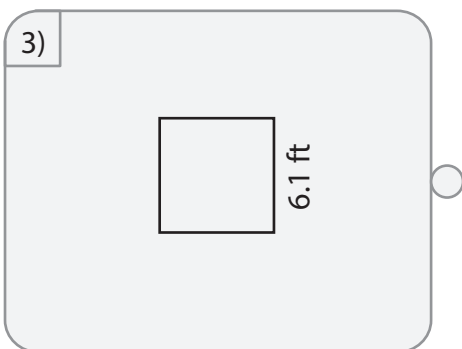
Match the following.



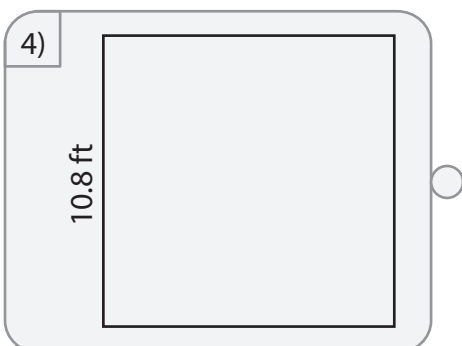
116.64 ft²



37.21 ft²



57.76 ft²



90.25 ft²



Area of Squares

Name _____

Score _____

Answer key

AS:08

Find the area of each square from the given side length.

1) Side length = 13.5 in

Area = **182.25** in²

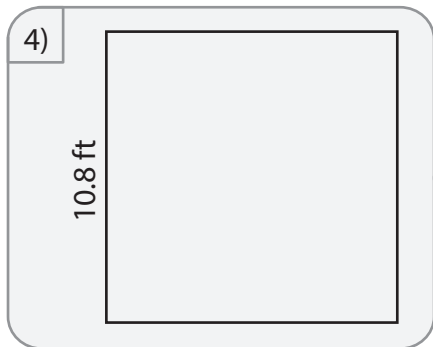
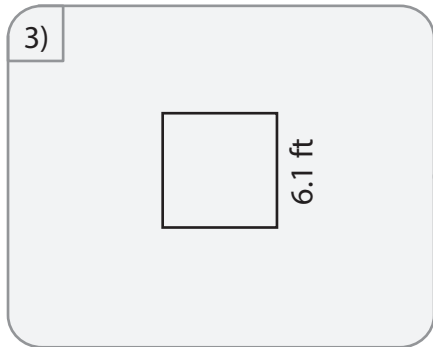
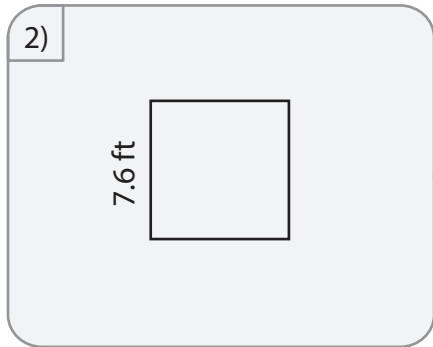
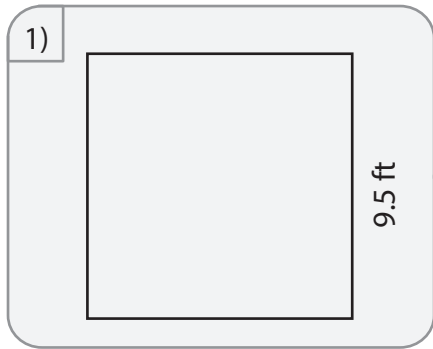
2) Side length = 1.3 ft

Area = **1.69** ft²

3) Side length = 7.7 yd

Area = **59.29** yd²

Match the following.



116.64 ft²

37.21 ft²

57.76 ft²

90.25 ft²