



Area of Squares


Name _____

Score _____

AS:03

Find the area of each square.

1)



19 ft

Area = _____


2)



23 yd

Area = _____

3)



30 in

Area = _____

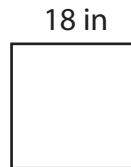
4)



24 yd

Area = _____


5)



18 in

Area = _____


6)



26 ft

Area = _____


7)



25 in

Area = _____

8)



28 ft

Area = _____

9)



21 yd

Area = _____



Area of Squares

Name _____


Score _____

Answer key

AS:03

Find the area of each square.

1)



19 ft

Area = 361 ft²


2)



23 yd

Area = 529 yd²

3)



30 in

Area = 900 in²

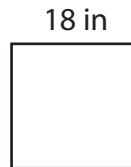
4)



24 yd

Area = 576 yd²


5)



18 in

Area = 324 in²


6)



26 ft

Area = 676 ft²


7)



25 in

Area = 625 in²

8)



28 ft

Area = 784 ft²

9)



21 yd

Area = 441 yd²