



# Area of Squares


Name \_\_\_\_\_

Score \_\_\_\_\_

AS:02

Find the area of each square.

1)



19 in

Area = \_\_\_\_\_


2)



10 ft

Area = \_\_\_\_\_


3)



17 yd

Area = \_\_\_\_\_


4)



15 yd

Area = \_\_\_\_\_

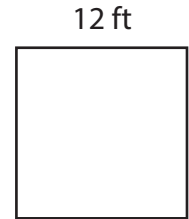
5)



20 in

Area = \_\_\_\_\_


6)



12 ft

Area = \_\_\_\_\_

7)



11 ft

Area = \_\_\_\_\_


8)



18 yd

Area = \_\_\_\_\_

9)



14 in

Area = \_\_\_\_\_



# Area of Squares

Name \_\_\_\_\_


Score \_\_\_\_\_

## Answer key

AS:02

Find the area of each square.

1)



19 in

Area = 361 in<sup>2</sup>

2)



10 ft

Area = 100 ft<sup>2</sup>


3)



17 yd

Area = 289 yd<sup>2</sup>


4)



15 yd

Area = 225 yd<sup>2</sup>

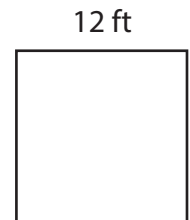
5)



20 in

Area = 400 in<sup>2</sup>

6)



12 ft

Area = 144 ft<sup>2</sup>


7)



11 ft

Area = 121 ft<sup>2</sup>

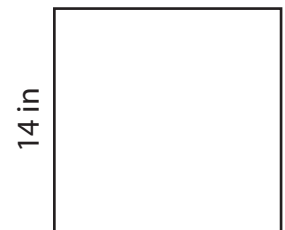
8)



18 yd

Area = 324 yd<sup>2</sup>

9)



14 in

Area = 196 in<sup>2</sup>