



Area of Squares

Name _____

Score _____

AS:01


Find the area of each square.

1)



Area = _____

2)




Area = _____

3)



Area = _____

4)



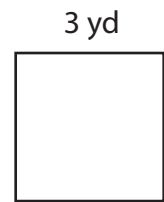
Area = _____

5)



Area = _____

6)



Area = _____

7)




Area = _____

8)



Area = _____

9)



Area = _____



Area of Squares

Name _____

Score _____

Answer key

AS:01


Find the area of each square.

1)




Area = 25 yd²

2)




Area = 64 in²

3)



Area = 121 ft²

4)



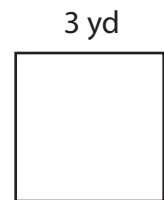
Area = 169 in²

5)




Area = 100 ft²

6)




Area = 9 yd²

7)




Area = 49 yd²

8)



Area = 4 in²

9)



Area = 256 ft²