



Area of Rectangles

Name _____

Score _____

AR:16

Find the area of each rectangle.

1) Breadth = 9 mm

Length = 1 cm

Area = _____ mm^2

3) Breadth = 0.17 m

Length = 10 cm

Area = _____ cm^2

5) Breadth = 15000 mm

Length = 8 m

Area = _____ m^2

2) Breadth = 1400 cm

Length = 11 m

Area = _____ m^2

4) Breadth = 0.021 m

Length = 18 mm

Area = _____ mm^2

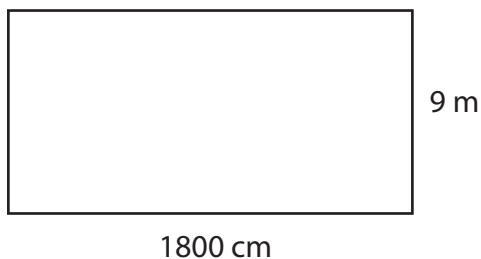
6) Breadth = 0.06 m

Length = 12 cm

Area = _____ cm^2

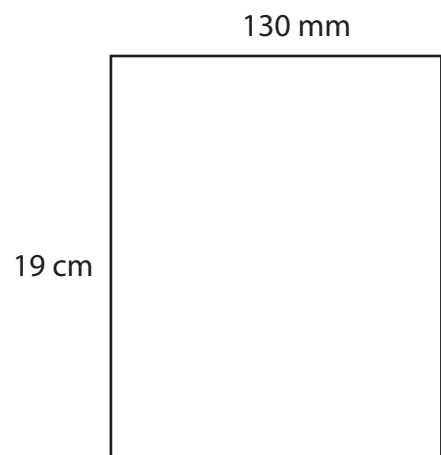
Find the area of each rectangle.

1)



Area = _____ m^2

2)



Area = _____ cm^2



Area of Rectangles

Name _____

Score _____

Answer key

AR:16

Find the area of each rectangle.

1) Breadth = 9 mm

Length = 1 cm

Area = 90 mm²

3) Breadth = 0.17 m

Length = 10 cm

Area = 170 cm²

5) Breadth = 15000 mm

Length = 8 m

Area = 120 m²

2) Breadth = 1400 cm

Length = 11 m

Area = 154 m²

4) Breadth = 0.021 m

Length = 18 mm

Area = 378 mm²

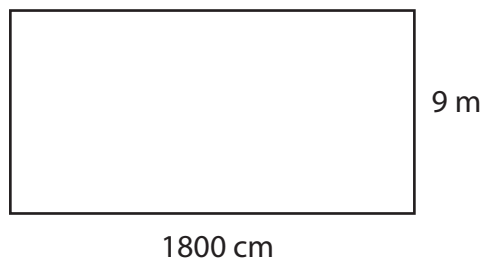
6) Breadth = 0.06 m

Length = 12 cm

Area = 72 cm²

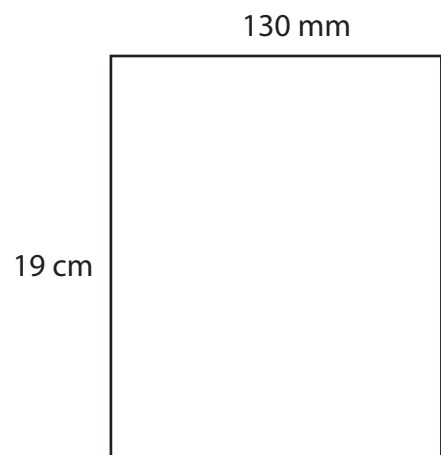
Find the area of each rectangle.

1)



Area = 162 m²

2)



Area = 247 cm²