



Area of Rectangles


Name _____

Score _____

AR:05

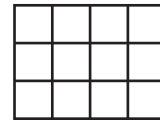
Find the area of each rectangle.

1) $\square = 2 \text{ cm}^2$



Area = _____

2) $\square = 8 \text{ m}^2$




Area = _____

3) $\square = 4 \text{ mm}^2$



Area = _____

4) $\square = 1 \text{ cm}^2$



Area = _____

5) $\square = 10 \text{ m}^2$



Area = _____

6) $\square = 7 \text{ mm}^2$



Area = _____



Area of Rectangles

Name _____


Score _____

Answer key

AR:05

Find the area of each rectangle.

1) $\square = 2 \text{ cm}^2$



Area = 140 cm²

3) $\square = 4 \text{ mm}^2$



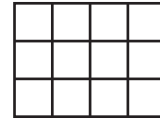
Area = 192 mm²

5) $\square = 10 \text{ m}^2$




Area = 80 m²

2) $\square = 8 \text{ m}^2$



Area = 768 m²

4) $\square = 1 \text{ cm}^2$



Area = 72 cm²

6) $\square = 7 \text{ mm}^2$



Area = 686 mm²