



Area of Rectangles


Name _____

Score _____

AR:04

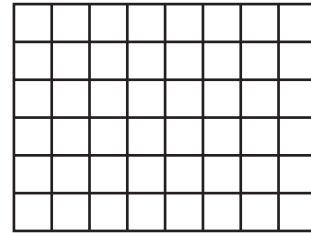
Find the area of each rectangle.

1) $\square = 3 \text{ m}^2$



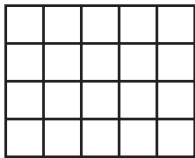
Area = _____

2) $\square = 1 \text{ mm}^2$




Area = _____

3) $\square = 5 \text{ cm}^2$



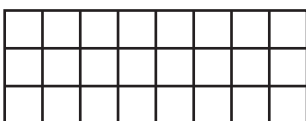
Area = _____

4) $\square = 8 \text{ m}^2$



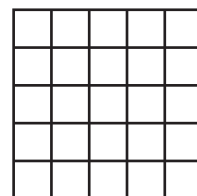
Area = _____

5) $\square = 2 \text{ mm}^2$



Area = _____

6) $\square = 6 \text{ cm}^2$



Area = _____



Area of Rectangles

Name _____


Score _____

Answer key

AR:04

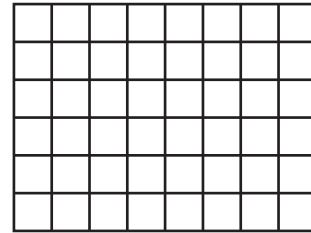
Find the area of each rectangle.

1) $\square = 3 \text{ m}^2$




Area = 441 m²

2) $\square = 1 \text{ mm}^2$




Area = 48 mm²

3) $\square = 5 \text{ cm}^2$




Area = 500 cm²

4) $\square = 8 \text{ m}^2$




Area = 72 m²

5) $\square = 2 \text{ mm}^2$



Area = 96 mm²

6) $\square = 6 \text{ cm}^2$



Area = 900 m²