



Area of Rectangles

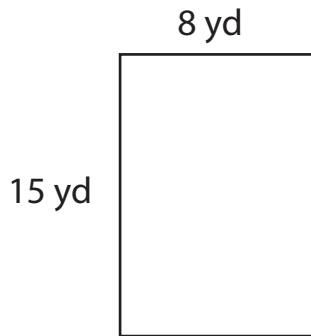
Name _____

Score _____

AR:03

Find the area of each rectangle.

1)



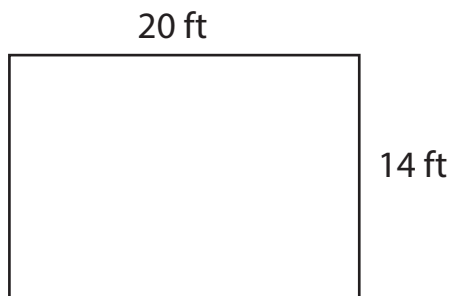
Area =

2)



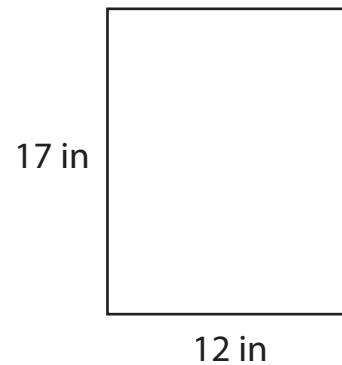
Area =

3)



Area =

4)



Area =

Complete the table.

Q.No	Breadth	Length	Area
1)	4 in	10 in	
2)	16 ft	23 ft	
3)	12 yd	9 yd	



Area of Rectangles

Name _____

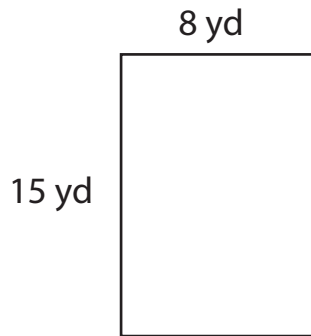
Score _____

Answer key

AR:03

Find the area of each rectangle.

1)



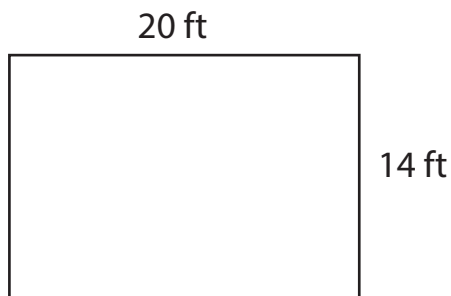
Area = **120 yd²**

2)



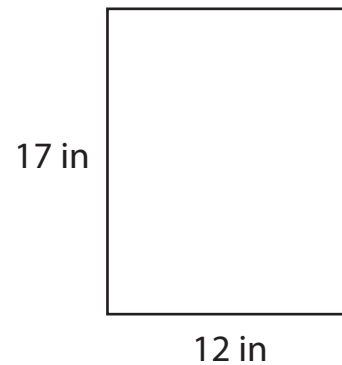
Area = **250 ft²**

3)



Area = **280 ft²**

4)



Area = **204 in²**

Complete the table.

Q.No	Breadth	Length	Area
1)	4 in	10 in	40 in²
2)	16 ft	23 ft	368 ft²
3)	12 yd	9 yd	108 yd²