



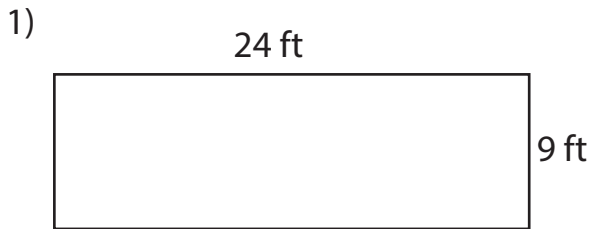
Area of Rectangles

Name _____

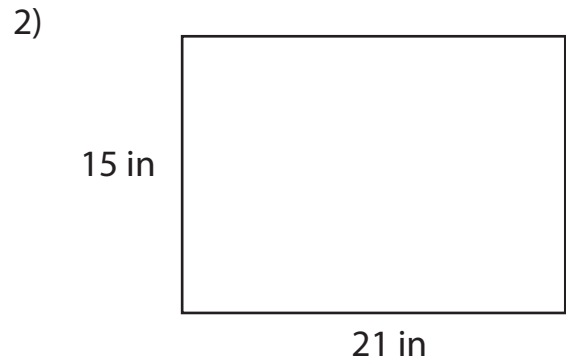
Score _____

AR:02

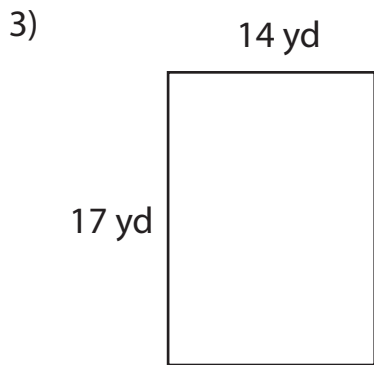
Find the area of each rectangle.



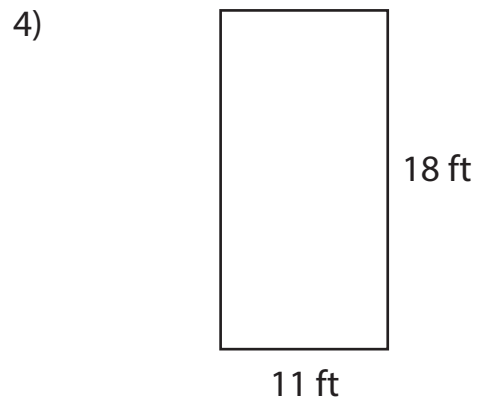
Area =



Area =



Area =



Area =

Complete the table.

Q.No	Breadth	Length	Area
1)	25 ft	20 ft	
2)	9 yd	13 yd	
3)	18 in	22 in	



Area of Rectangles

Name _____

Score _____

Answer key

AR:02

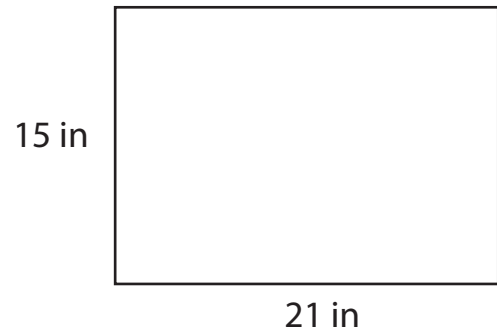
Find the area of each rectangle.

1)



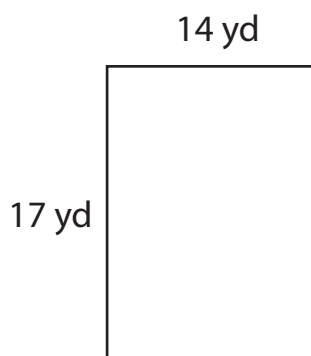
Area = **216 ft²**

2)



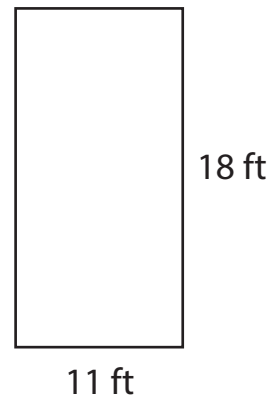
Area = **315 in²**

3)



Area = **238 yd²**

4)



Area = **198 ft²**

Complete the table.

Q.No	Breadth	Length	Area
1)	25 ft	20 ft	500 ft²
2)	9 yd	13 yd	117 yd²
3)	18 in	22 in	396 in²