



# Area of Rectangles

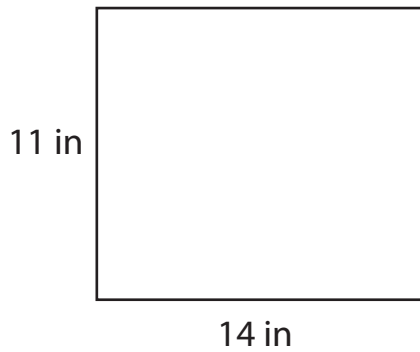
Name \_\_\_\_\_

Score \_\_\_\_\_

AR:01

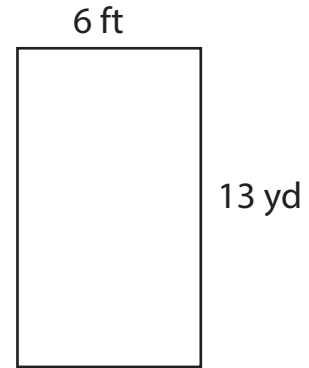
Find the area of each rectangle.

1)



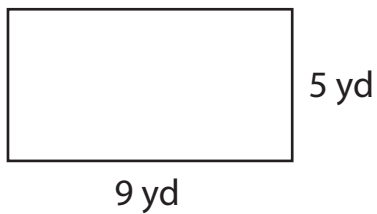
Area =

2)



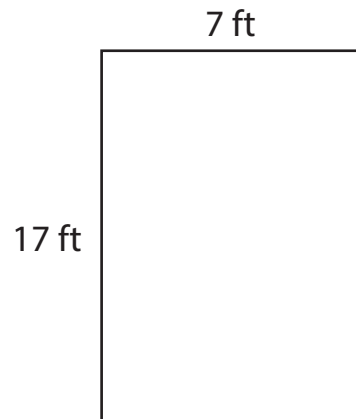
Area =

3)



Area =

4)



Area =

Complete the table.

Q.No	Breadth	Length	Area
1)	11 yd	8 yd	
2)	10 in	19 in	
3)	6 ft	3 ft	



# Area of Rectangles

Name \_\_\_\_\_

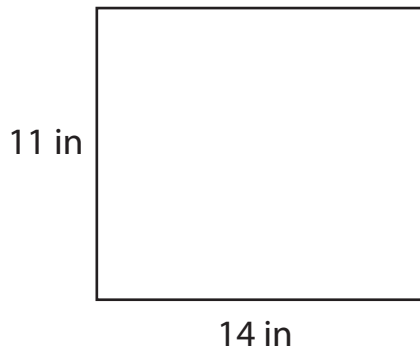
Score \_\_\_\_\_

## Answer key

AR:01

Find the area of each rectangle.

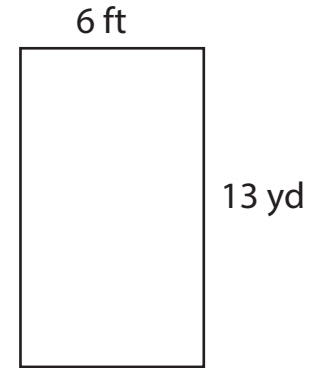
1)



Area =

**154 in<sup>2</sup>**

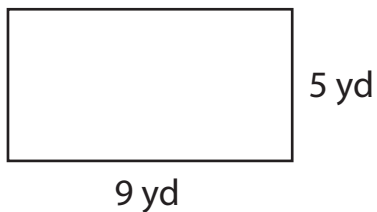
2)



Area =

**78 yd<sup>2</sup>**

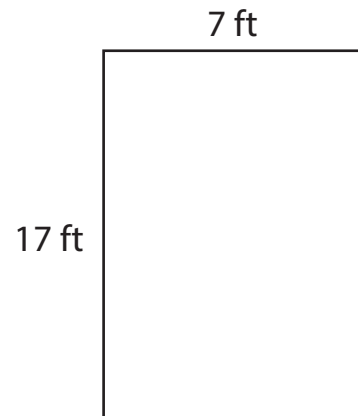
3)



Area =

**45 yd<sup>2</sup>**

4)



Area =

**119 ft<sup>2</sup>**

Complete the table.

Q.No	Breadth	Length	Area
1)	11 yd	8 yd	<b>88 yd<sup>2</sup></b>
2)	10 in	19 in	<b>190 in<sup>2</sup></b>
3)	6 ft	3 ft	<b>18 ft<sup>2</sup></b>