



Area of Quadrilateral

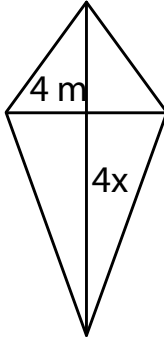
Name _____

Score _____

AQ:24

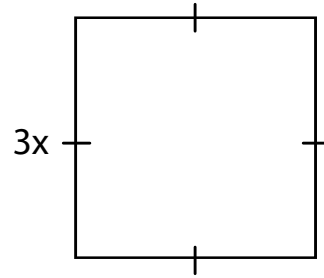
Find x.

1) Area = 16 m^2



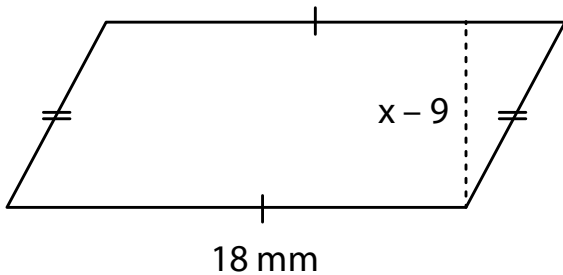
x =

2) Area = 81 cm^2



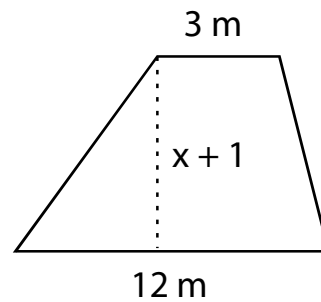
x =

3) Area = 126 mm^2



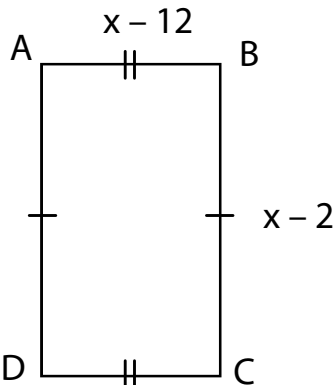
x =

4) Area = 45 m^2



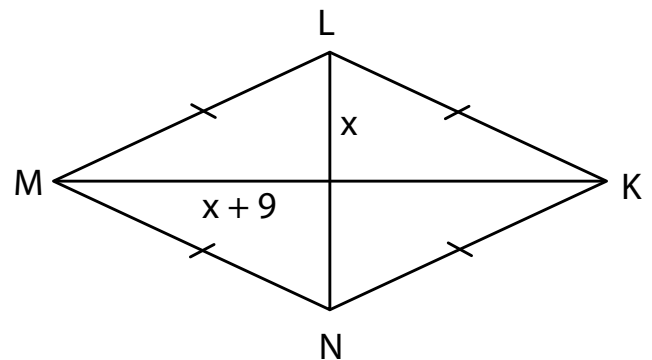
x =

5) Area = 75 cm^2



x = _____ ; CD = _____
AD = _____

6) Area = 95 mm^2



x = _____ ; LN = _____
KM = _____



Area of Quadrilateral

Name _____

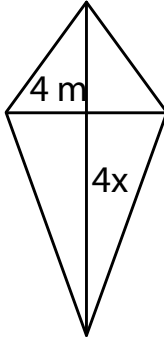
Score _____

Answer key

AQ:24

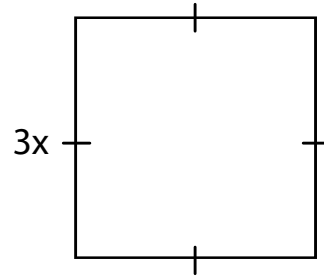
Find x.

1) Area = 16 m^2



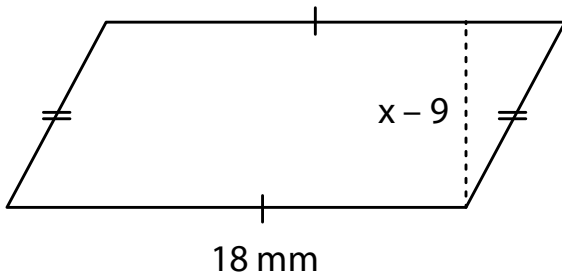
x = **2**

2) Area = 81 cm^2



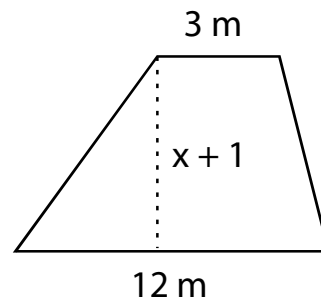
x = **3**

3) Area = 126 mm^2



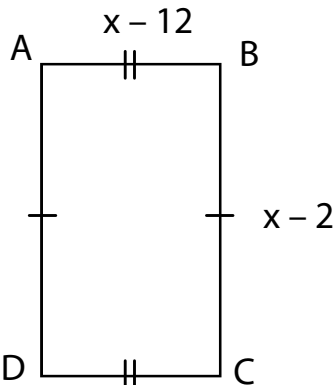
x = **16**

4) Area = 45 m^2



x = **5**

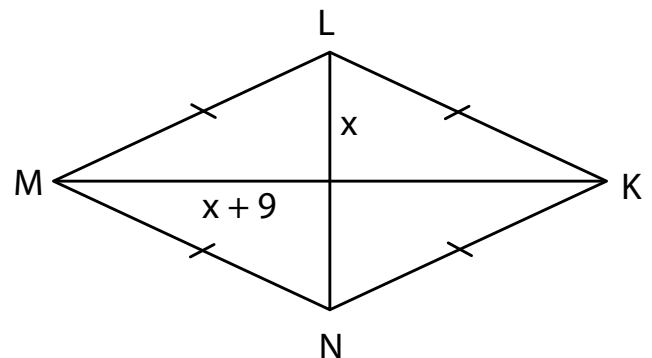
5) Area = 75 cm^2



x = **17** ; CD = **5 cm**

AD = **15 cm**

6) Area = 95 mm^2



x = **10** ; LN = **10 mm**

KM = **19 mm**