



Area of Quadrilateral

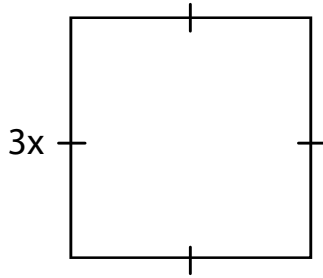
Name _____

Score _____

AQ:19

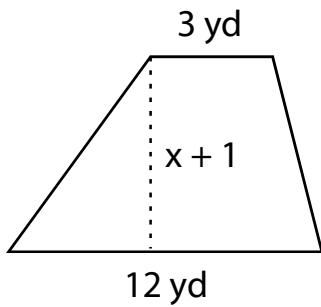
Find x.

1) Area = 81 in^2



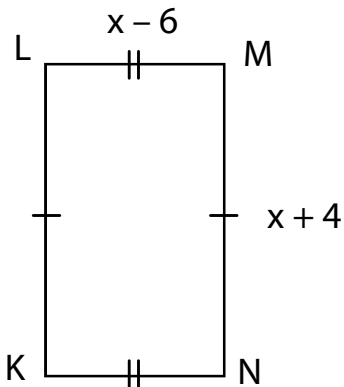
x =

3) Area = 45 yd^2



x =

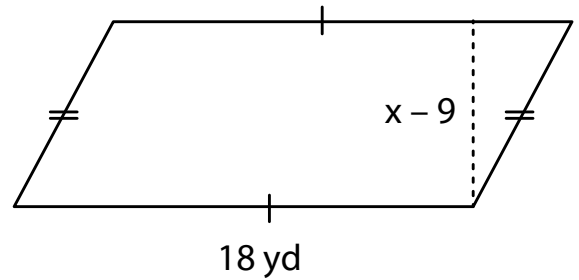
5) Area = 75 ft^2



x = _____ ; KN = _____

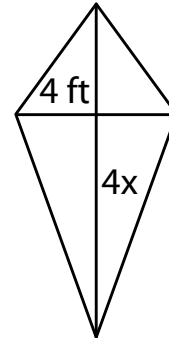
KL = _____

2) Area = 126 yd^2



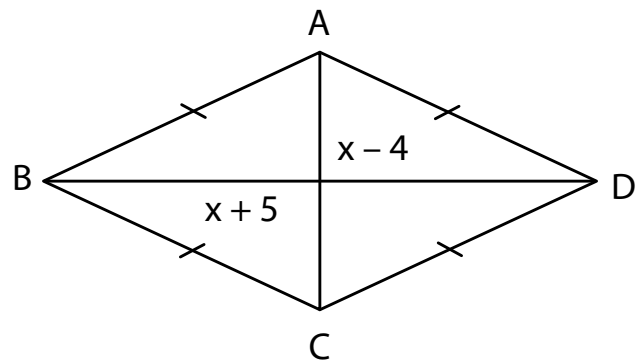
x =

4) Area = 16 ft^2



x =

6) Area = 95 in^2



x = _____ ; AC = _____

BD = _____



Area of Quadrilateral

Name _____

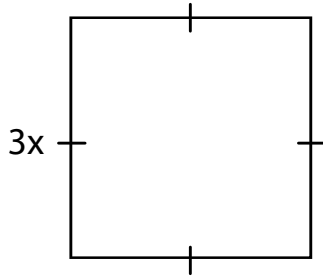
Score _____

Answer key

AQ:19

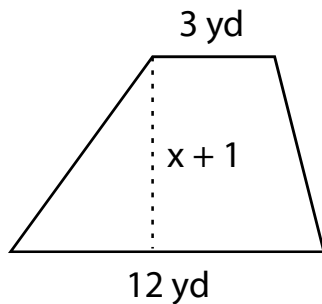
Find x.

1) Area = 81 in^2



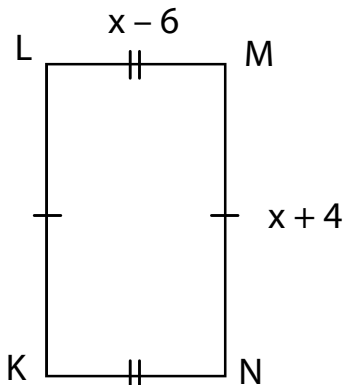
x = **3**

3) Area = 45 yd^2



x = **5**

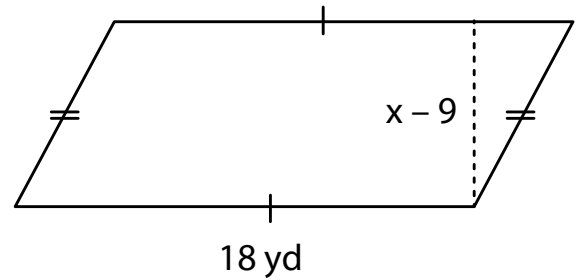
5) Area = 75 ft^2



x = **11** ; KN = **5 ft**

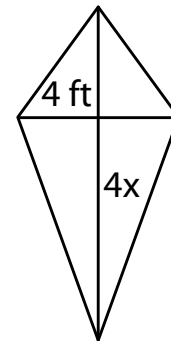
KL = **15 ft**

2) Area = 126 yd^2



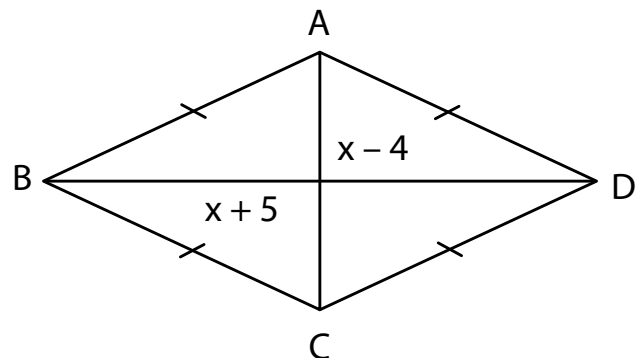
x = **16**

4) Area = 16 ft^2



x = **2**

6) Area = 95 in^2



x = **14** ; AC = **10 in**

BD = **19 in**