



NAMING ANGLES

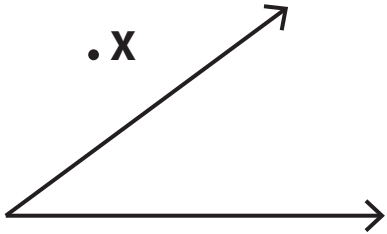
Name _____

Score _____

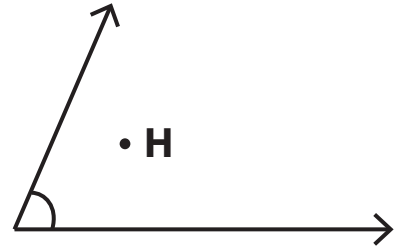
AN:15

Mention the points as interior or exterior of the angle.

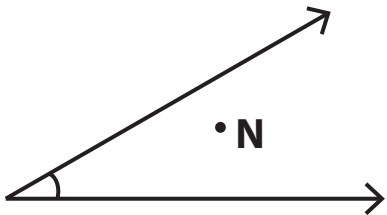
1)



2)



3)



4)



1) Draw an angle with a point F in the interior.

2) Draw an angle with points X and Y in the exterior.



NAMING ANGLES

Name _____

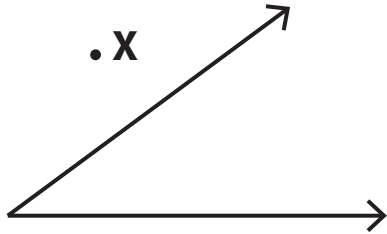
Score _____

Answer key

AN:15

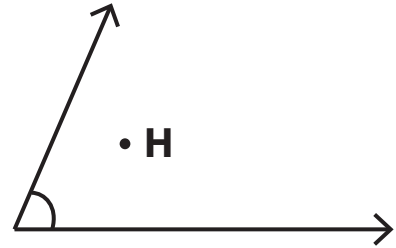
Mention the points as interior or exterior of the angle.

1)



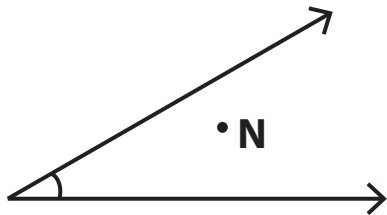
X - exterior

2)



H - interior

3)



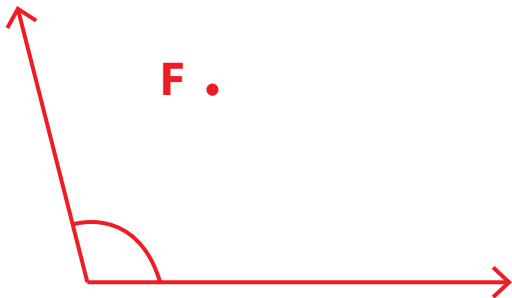
N - interior

4)



R - exterior

1) Draw an angle with a point F in the interior.



2) Draw an angle with points X and Y in the exterior.

