



NAMING ANGLES

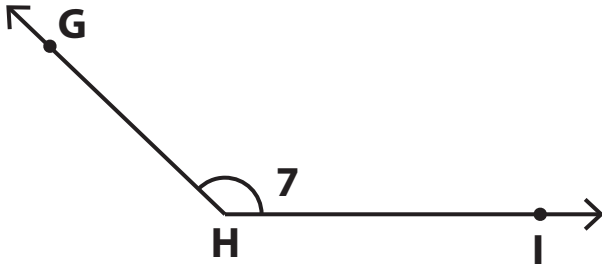
Name _____

Score _____

AN:12

Use the angles and answer the questions.

1)

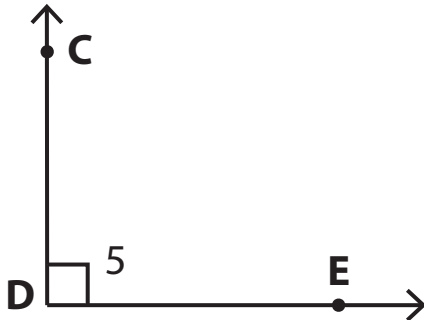


1) Name the vertex _____

2) Name the arms of angle $\angle 7$

3) Name the angle in four ways.

2)

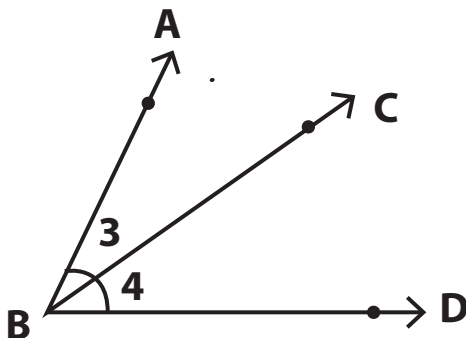


1) Name the angle in two ways using three points.

2) Name the arms of the angle.

3) D is called the _____ of the angle.

3)



1) Name the vertex _____

2) Name the arms for $\angle 3$

3) Name the arms of the angle with vertex B. _____



NAMING ANGLES

Name _____

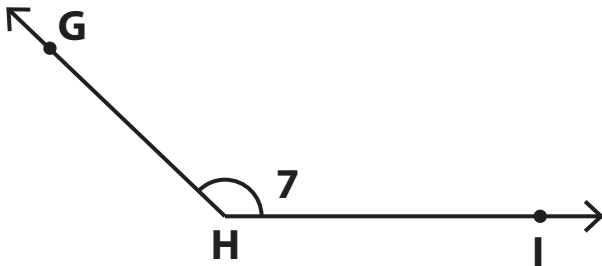
Score _____

Answer key

AN:12

Use the angles and answer the questions.

1)

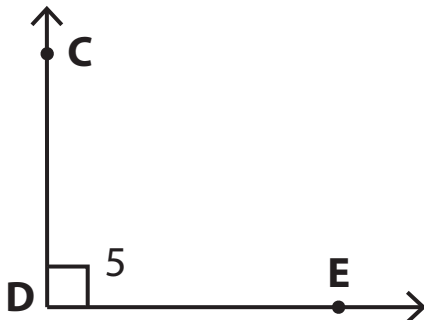


1) Name the vertex **H**

2) Name the arms of angle $\angle 7$
 GH, HI

3) Name the angle in four ways.
 $\angle 7, \angle GHI, \angle IHG, \angle H$

2)

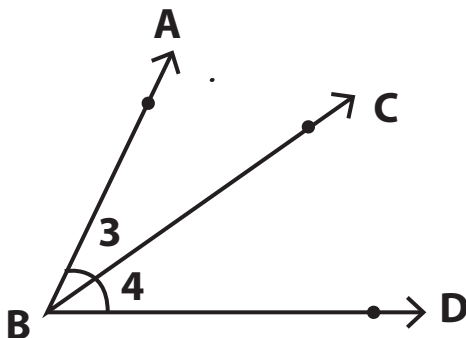


1) Name the angle in two ways using three points.
 $\angle CDE, \angle EDC$

2) Name the arms of the angle.
 CD, DE

3) D is called the **vertex** of the angle.

3)



1) Name the vertex **B**

2) Name the arms for $\angle 3$
 AB, BC

3) Name the arms of the angle with vertex B. **BA, BC, BD**