



NAMING ANGLES

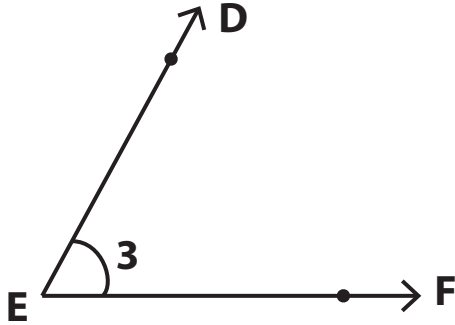
Name _____

Score _____

AN:11

Use the angles and answer the questions.

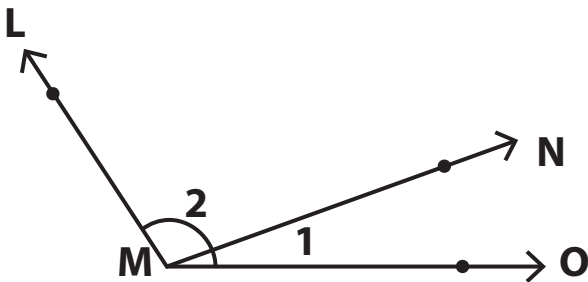
1)



- 1) Name the vertex _____
- 2) Name the arms of angle $\angle 3$

- 3) Name the angle in four ways.

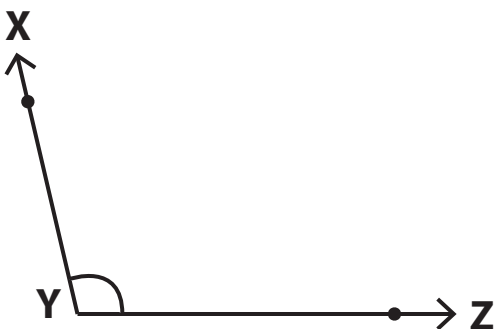
2)



- 1) Name the vertex _____
- 2) Name the arms for $\angle 2$

- 3) Name the arms of the angle with vertex M. _____

3)



- 1) Name the angle in two ways using three points.

- 2) Name the arms of the angle.

- 3) Y is called the _____ of the angle.



NAMING ANGLES

Name _____

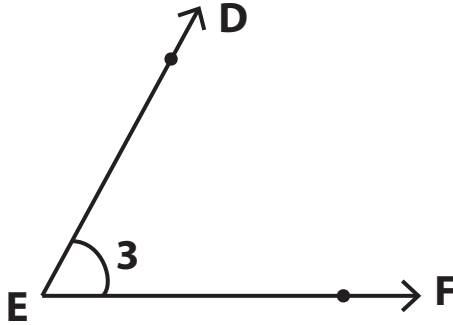
Score _____

Answer key

AN:11

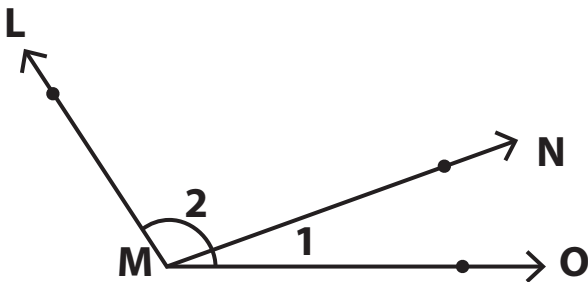
Use the angles and answer the questions.

1)



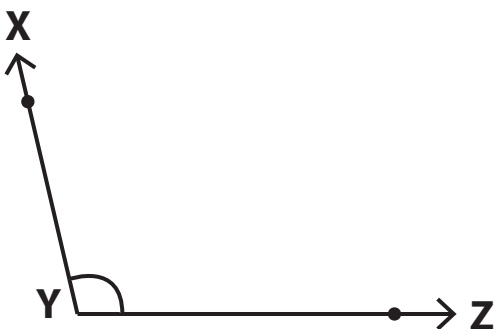
- 1) Name the vertex **E**
- 2) Name the arms of angle $\angle 3$
 DE, EF
- 3) Name the angle in four ways.
 $\angle 3, \angle DEF, \angle FED, \angle E$

2)



- 1) Name the vertex **M**
- 2) Name the arms for $\angle 2$
 LM, MN
- 3) Name the arms of the angle with vertex M. **ML, MN, MO**

3)



- 1) Name the angle in two ways using three points.
 $\angle XYZ, \angle ZYX$
- 2) Name the arms of the angle.
 XY, YZ
- 3) Y is called the **vertex** of the angle.