



NAMING ANGLES

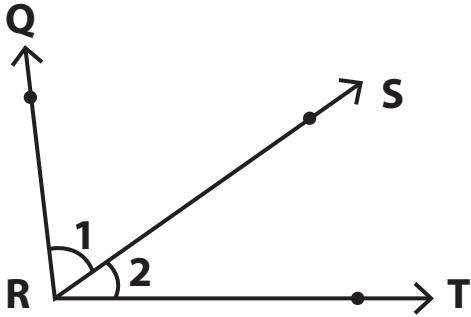
Name _____

Score _____

AN:10

Look at each figure and answer the questions.

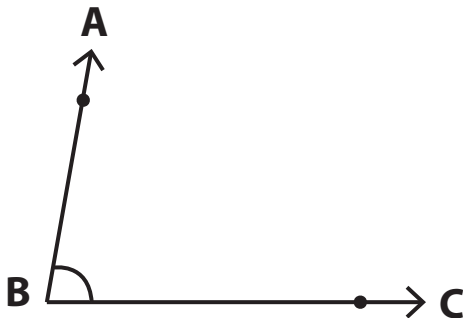
1)



- 1) Name the vertex _____
- 2) Name the arms for $\angle 1$

- 3) Name the arms of the angle with vertex R. _____

2)

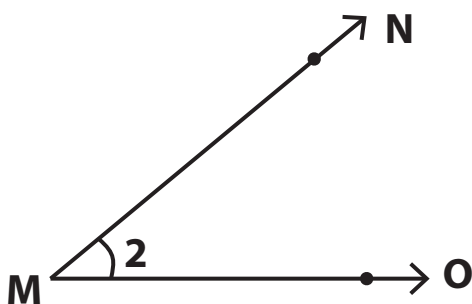


- 1) Name the angle in two ways using three points.

- 2) Name the arms of the angle.

- 3) B is called the _____ of the angle.

3)



- 1) Name the vertex _____
- 2) Name the arms of angle $\angle 2$

- 3) Name the angle in four ways.



NAMING ANGLES

Name _____

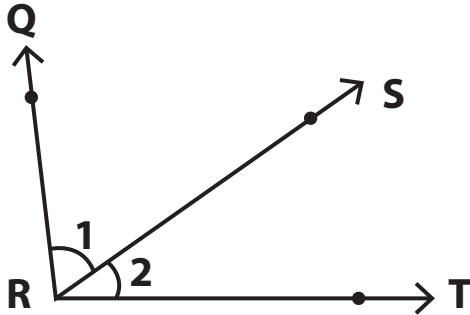
Score _____

Answer key

AN:10

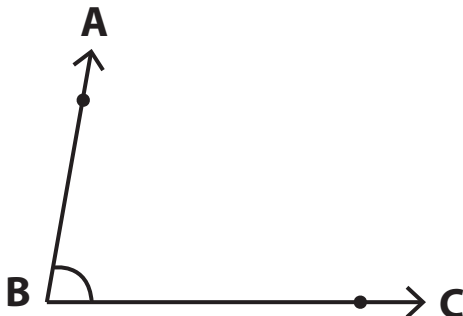
Look at each figure and answer the questions.

1)



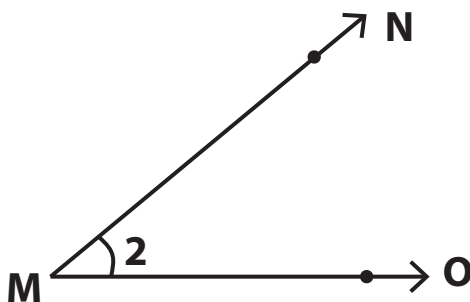
- 1) Name the vertex **R**
- 2) Name the arms for $\angle 1$
 QR, RS
- 3) Name the arms of the angle with vertex R. **QR, RS, TR**

2)



- 1) Name the angle in two ways using three points.
 $\angle ABC, \angle CBA$
- 2) Name the arms of the angle.
 AB, BC
- 3) B is called the **vertex** of the angle.

3)



- 1) Name the vertex **M**
- 2) Name the arms of angle $\angle 2$
 MN, MO
- 3) Name the angle in four ways.
 $\angle 2, \angle NMO, \angle OMN, \angle M$