



# NAMING ANGLES

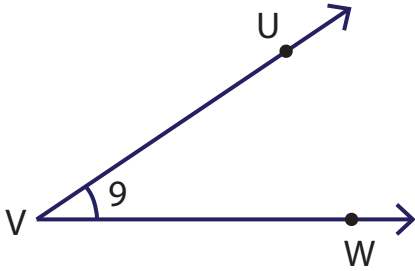
Name \_\_\_\_\_

Score \_\_\_\_\_

AN:09

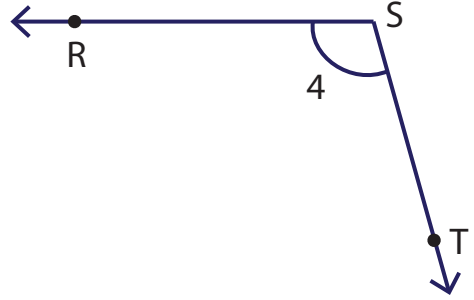
Represent the four different ways to name an angle.

1)



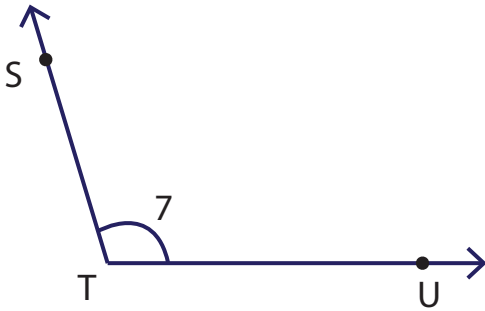
$\angle V, \angle UVW, \angle WVU, \angle 9$

4)



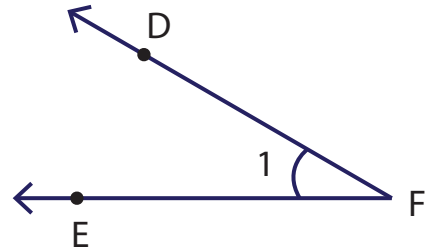
\_\_\_\_\_

2)



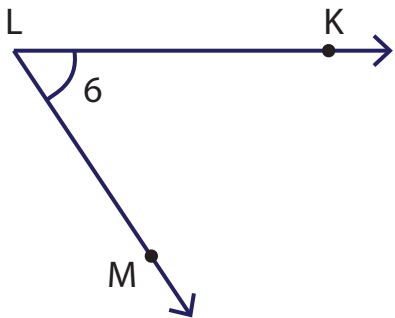
\_\_\_\_\_

5)



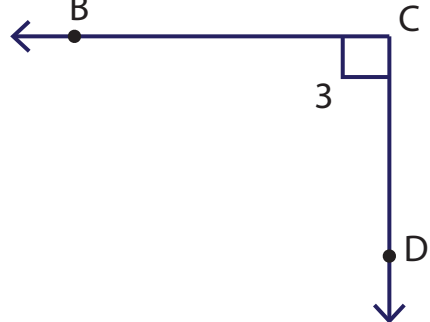
\_\_\_\_\_

3)



\_\_\_\_\_

6)



\_\_\_\_\_



# NAMING ANGLES

Name \_\_\_\_\_

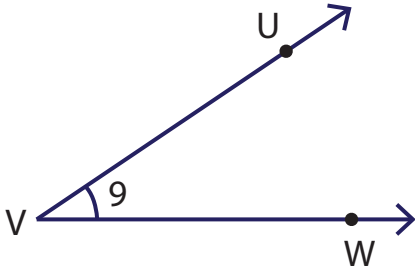
Score \_\_\_\_\_

## Answer key

AN:09

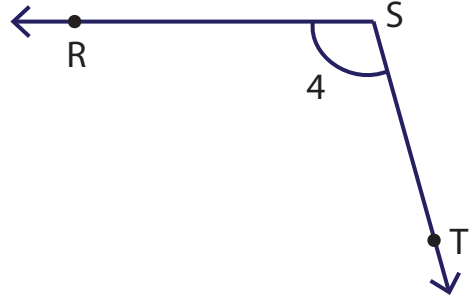
Represent the four different ways to name an angle.

1)



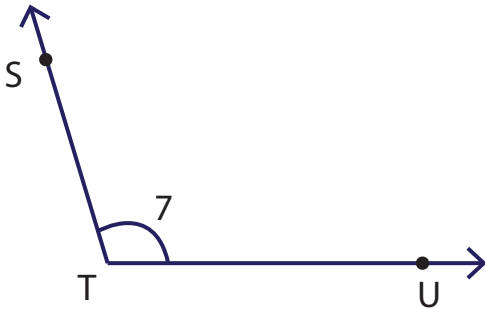
$\angle V, \angle UVW, \angle WVU, \angle 9$

4)



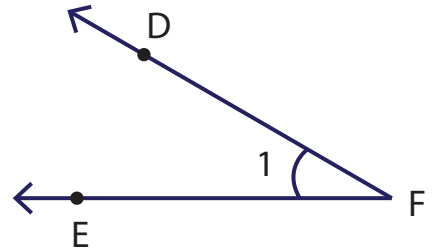
$\angle S, \angle RST, \angle TSR, \angle 4$

2)



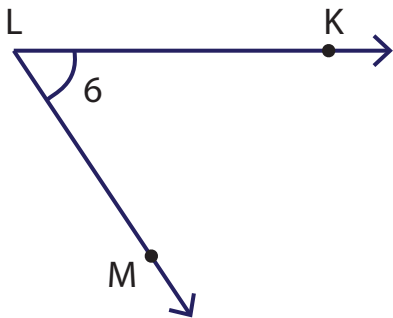
$\angle T, \angle STU, \angle UTS, \angle 7$

5)



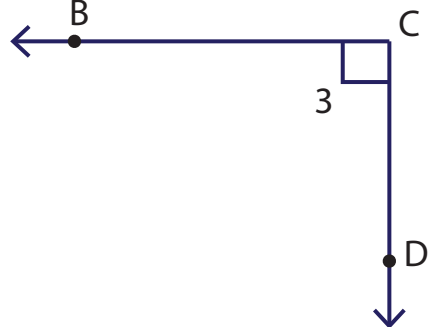
$\angle F, \angle DFE, \angle EFD, \angle 1$

3)



$\angle L, \angle KLM, \angle MLK, \angle 6$

6)



$\angle C, \angle BCD, \angle DCB, \angle 3$