



NAMING ANGLES

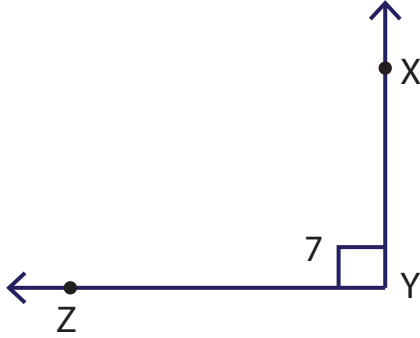
Name _____

Score _____

AN:08

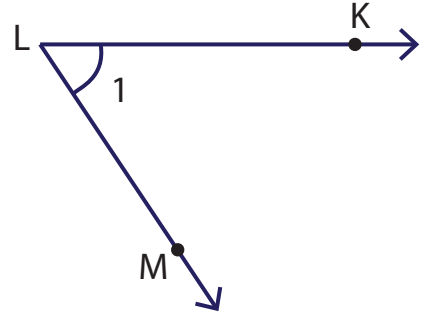
Represent the four different ways to name an angle.

1)

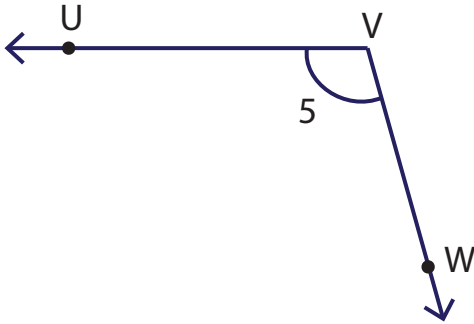


$\angle Y, \angle XYZ, \angle ZYX, \angle 7$

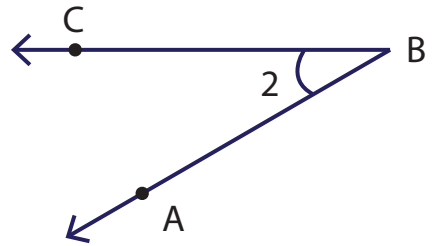
4)



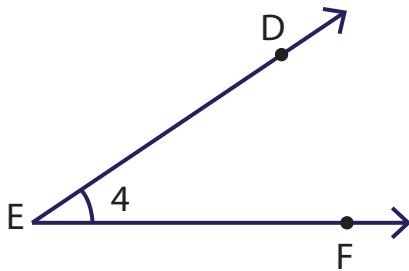
2)



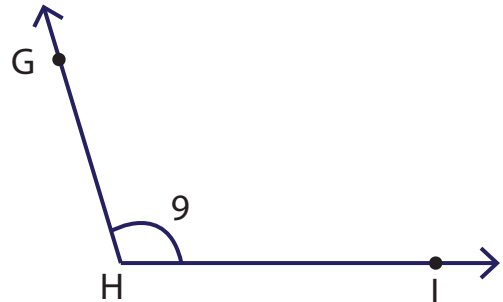
5)



3)



6)





NAMING ANGLES

Name _____

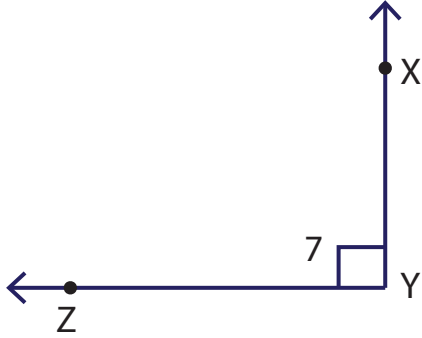
Score _____

Answer key

AN:08

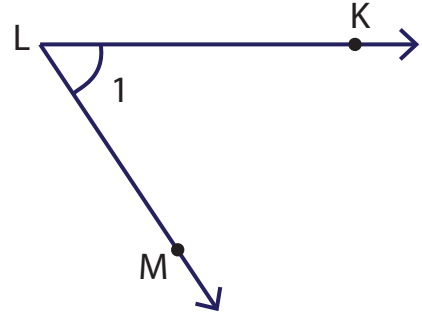
Represent the four different ways to name an angle.

1)



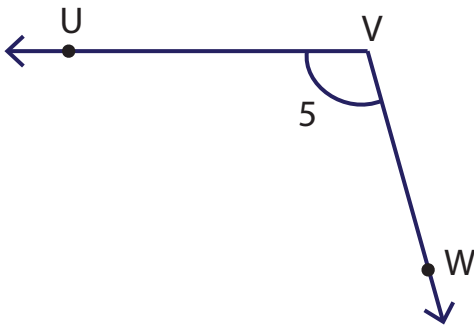
$\angle Y, \angle XYZ, \angle ZYX, \angle 7$

4)



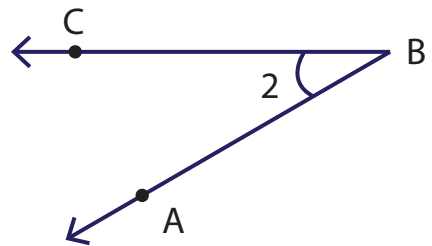
$\angle L, \angle KLM, \angle MLK, \angle 1$

2)



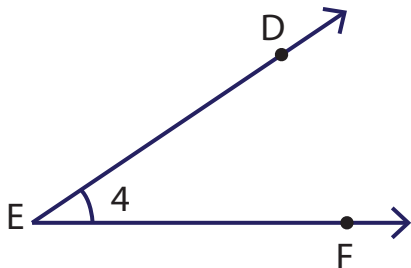
$\angle V, \angle UVW, \angle WVU, \angle 5$

5)



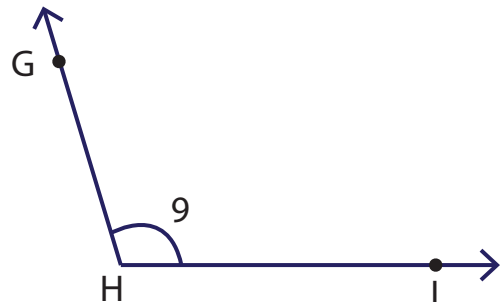
$\angle B, \angle CBA, \angle ABC, \angle 2$

3)



$\angle E, \angle DEF, \angle FED, \angle 4$

6)



$\angle H, \angle GHI, \angle IHG, \angle 9$