



# NAMING ANGLES

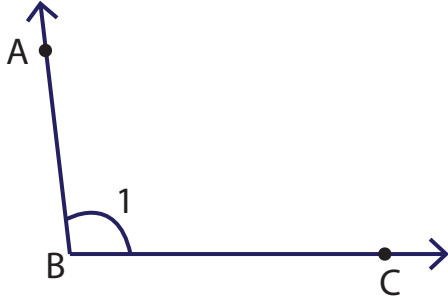
Name \_\_\_\_\_

Score \_\_\_\_\_

AN:07

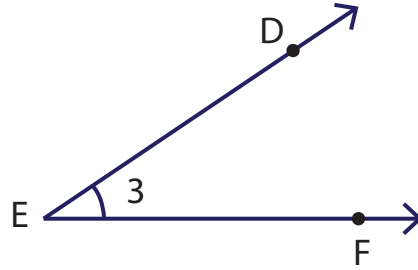
Represent the four different ways to name an angle.

1)



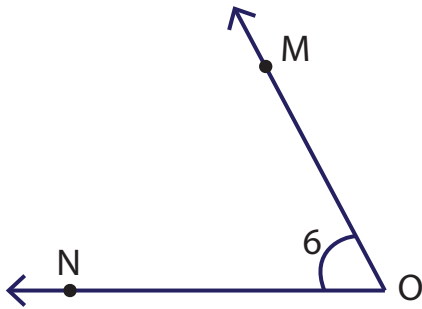
$\angle B$ ,  $\angle ABC$ ,  $\angle CBA$ ,  $\angle 1$

4)



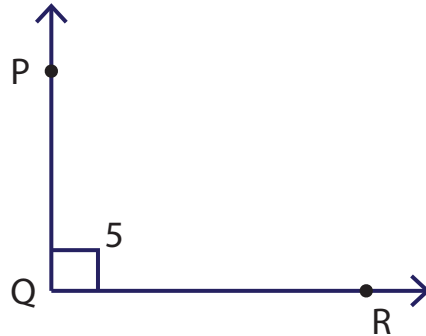
\_\_\_\_\_

2)



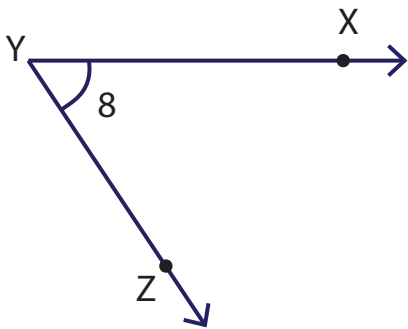
\_\_\_\_\_

5)



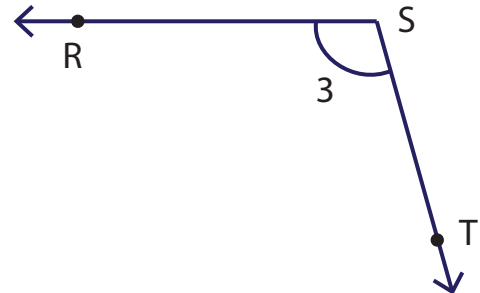
\_\_\_\_\_

3)



\_\_\_\_\_

6)



\_\_\_\_\_



# NAMING ANGLES

Name \_\_\_\_\_

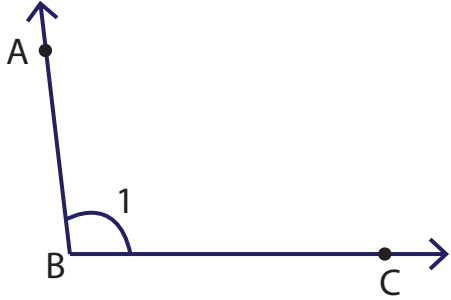
Score \_\_\_\_\_

## Answer key

AN:07

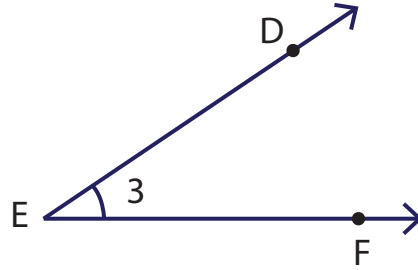
Represent the four different ways to name an angle.

1)



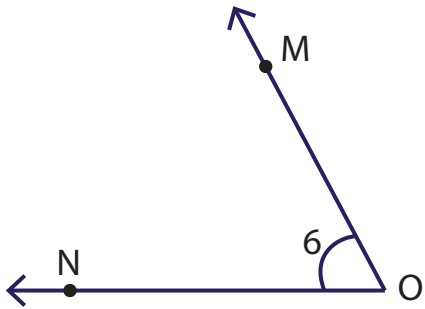
$\angle B, \angle ABC, \angle CBA, \angle 1$

4)



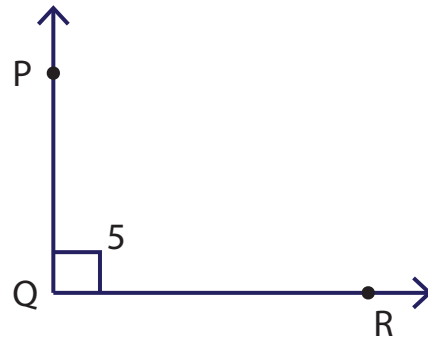
$\angle E, \angle DEF, \angle FED, \angle 3$

2)



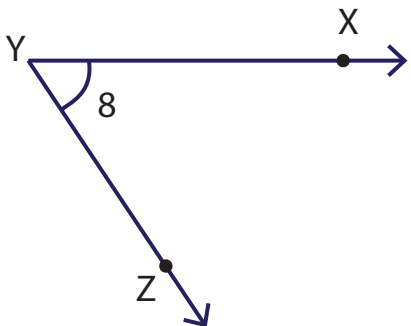
$\angle O, \angle MON, \angle NOM, \angle 6$

5)



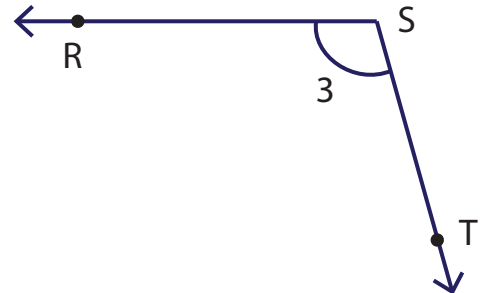
$\angle Q, \angle PQR, \angle RQP, \angle 5$

3)



$\angle Y, \angle XYZ, \angle ZYX, \angle 8$

6)



$\angle S, \angle RST, \angle TSR, \angle 3$