



PARTS OF ANGLES

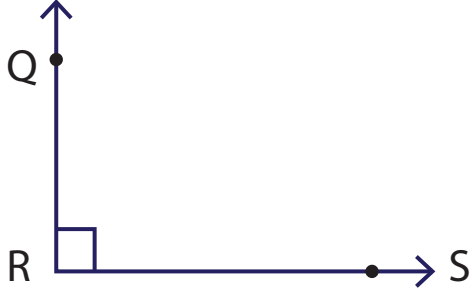
Name _____

Score _____

AN:06

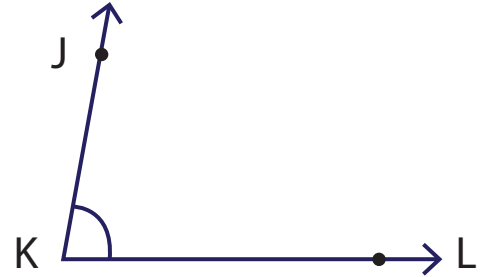
Write the letter/s used to represent the vertex and arms of the angles shown below.

1)



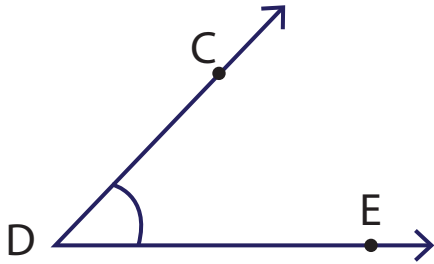
Vertex _____ Arms _____

2)



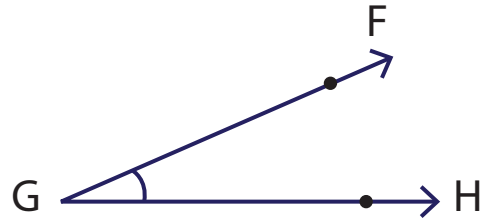
Vertex _____ Arms _____

3)



Vertex _____ Arms _____

4)



Vertex _____ Arms _____

Draw an angle using the information given below. (Figures may vary)

1) Vertex : W
Arms : WX, WY

2) Vertex : R
Arms : RS, RT



PARTS OF ANGLES

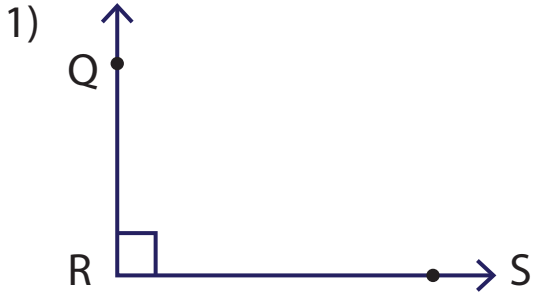
Name _____

Score _____

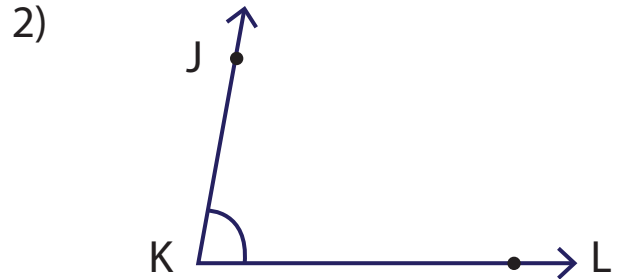
Answer key

AN:06

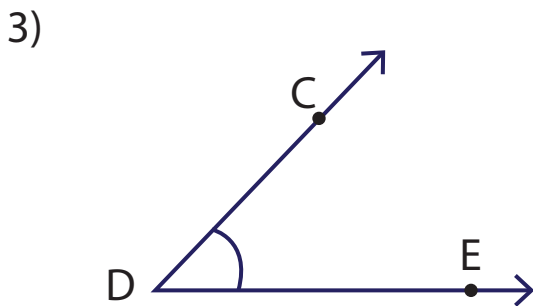
Write the letter/s used to represent the vertex and arms of the angles shown below.



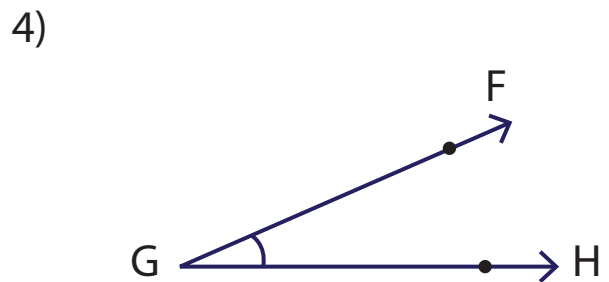
Vertex R Arms QR, RS



Vertex K Arms JK, KL



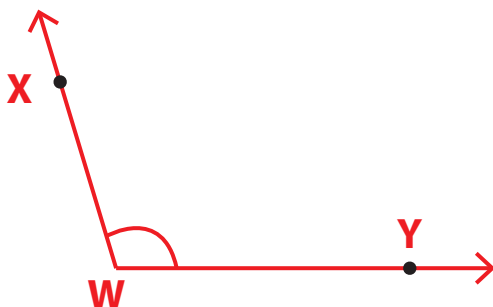
Vertex D Arms CD, DE



Vertex G Arms FG, GH

Draw an angle using the information given below. (Figures may vary)

- 1) Vertex : W
Arms : WX, WY



- 2) Vertex : R
Arms : RS, RT

